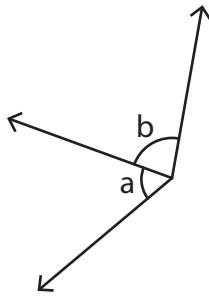


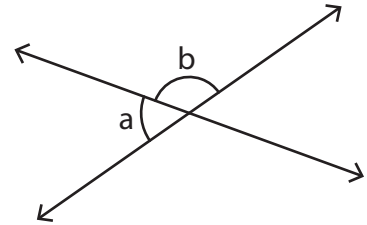
# Adjacent Angles

State whether the indicated angle pairs are adjacent or not.

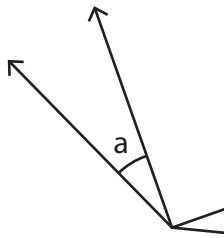
1)



2)



3)



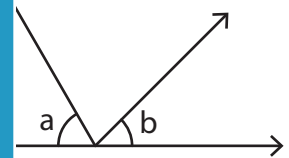
## PREVIEW

Gain complete access to the largest collection of worksheets in all subjects!

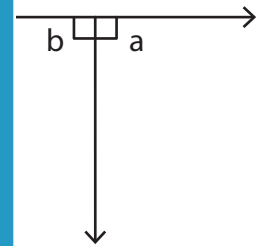
Members, please log in to download this worksheet.

Not a member? Please sign up to gain complete access.

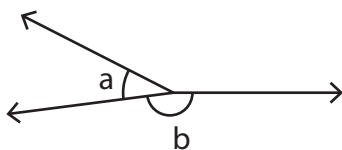
www.mathworksheets4kids.com



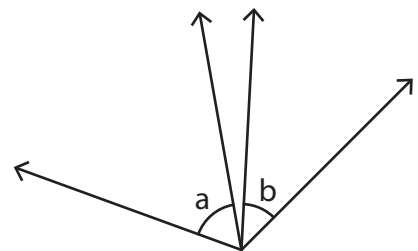
5)



7)



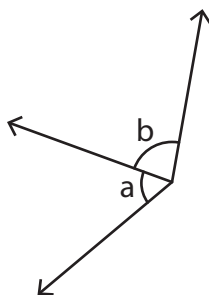
8)



# Adjacent Angles

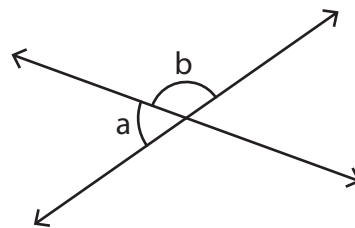
State whether the indicated angle pairs are adjacent or not.

1)



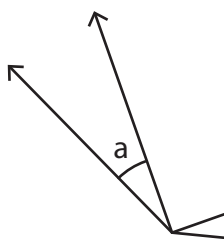
**adjacent**

2)

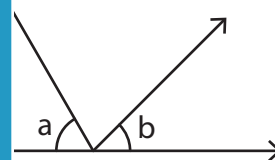


**adjacent**

3)



**not adj**

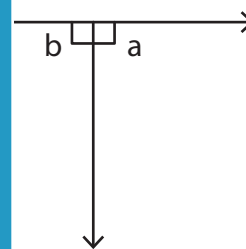


**not adjacent**

5)



**adjac**



**adjacent**

**PREVIEW**

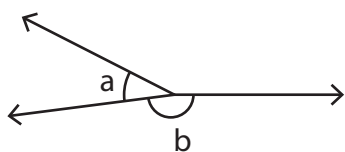
Gain complete access to the largest collection of worksheets in all subjects!

Members, please log in to download this worksheet.

Not a member? Please sign up to gain complete access.

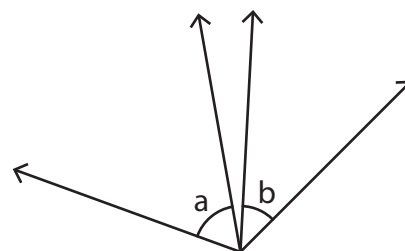
[www.mathworksheets4kids.com](http://www.mathworksheets4kids.com)

7)



**adjacent**

8)



**not adjacent**