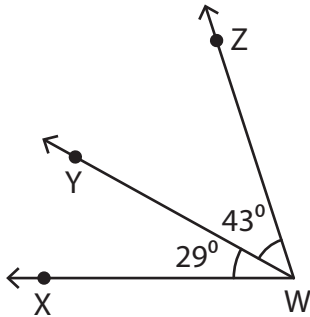


Adjacent Angles

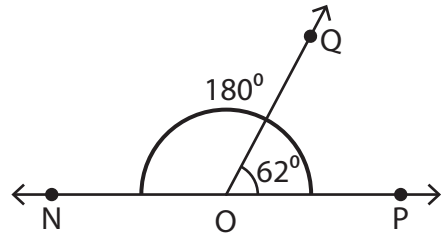
Find the measure of each indicated angle.

1)



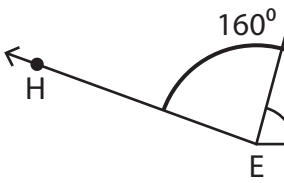
$m\angle ZWX =$ _____

2)

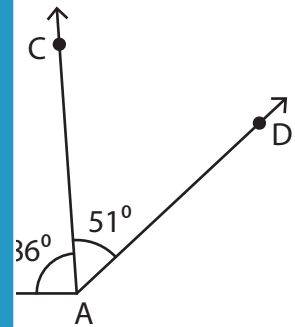


$=$ _____

3)



$m\angle HEG =$ _____



$=$ _____

PREVIEW

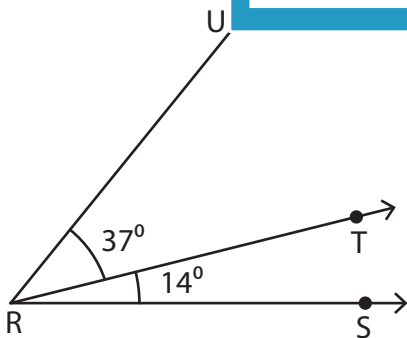
Gain complete access to the largest collection of worksheets in all subjects!

Members, please log in to download this worksheet.

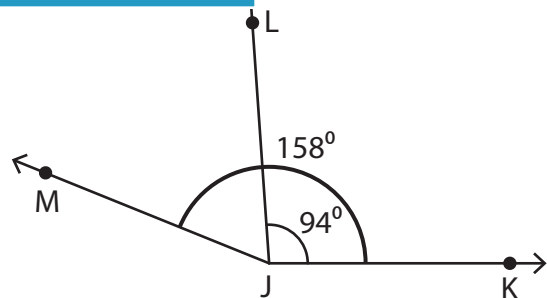
Not a member? Please sign up to gain complete access.

www.mathworksheets4kids.com

5)



$m\angle URS =$ _____

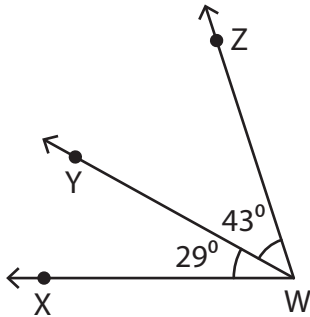


$m\angle MJL =$ _____

Adjacent Angles

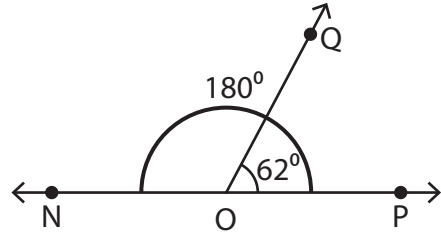
Find the measure of each indicated angle.

1)



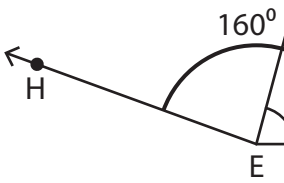
$m\angle ZWX =$ _____

2)

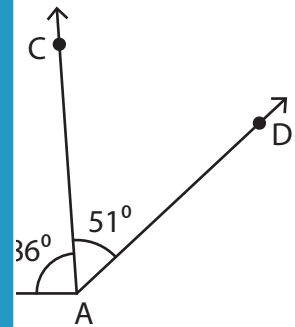


$=$ 118°

3)

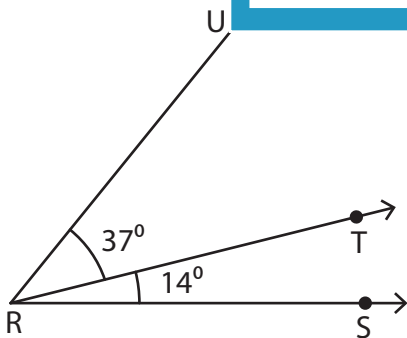


$m\angle HEG =$ _____

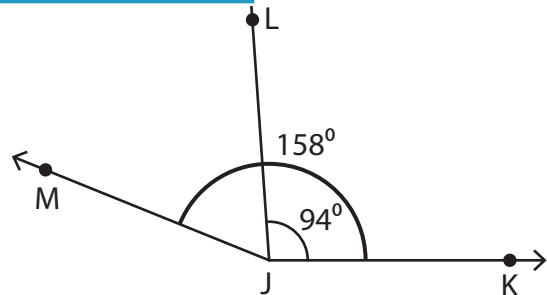


$=$ 137°

5)



$m\angle URS =$ 51°



$m\angle MJL =$ 64°

PREVIEW

Gain complete access to the largest collection of worksheets in all subjects!

Members, please log in to download this worksheet.

Not a member? Please sign up to gain complete access.

www.mathworksheets4kids.com