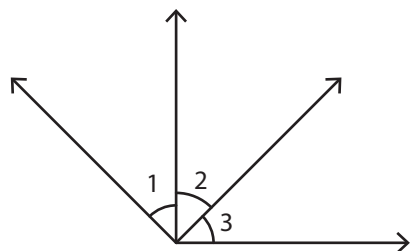


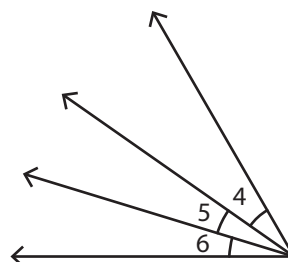
Adjacent Angles

Identify the two pairs of adjacent angles in each figure.

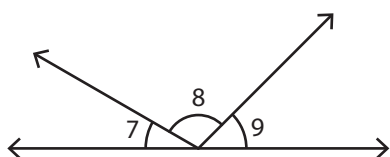
1)



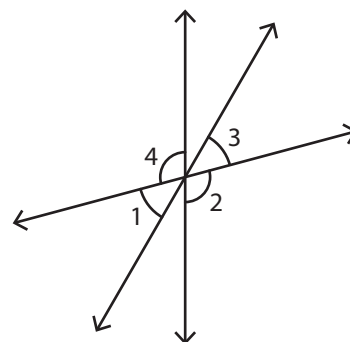
2)



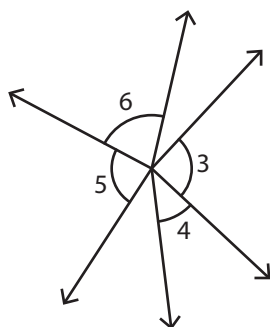
3)



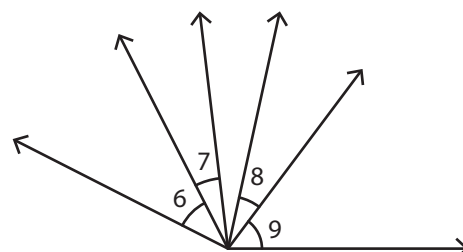
4)



5)



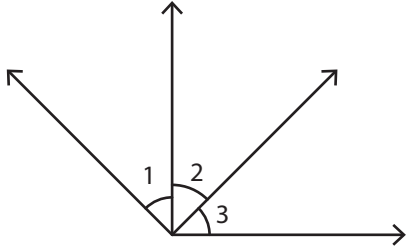
6)



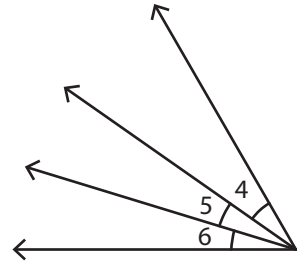
Adjacent Angles

Identify the two pairs of adjacent angles in each figure.

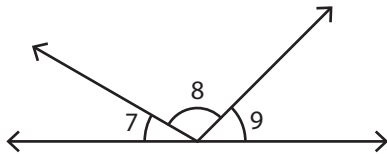
1)

 **$\angle 1, \angle 2$** **$\angle 2, \angle 3$**

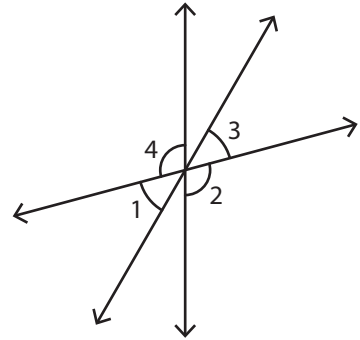
2)

 **$\angle 4, \angle 5$** **$\angle 5, \angle 6$**

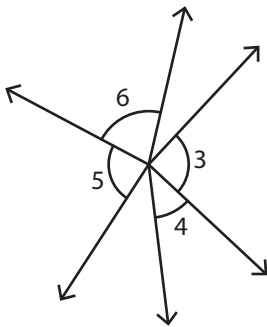
3)

 **$\angle 7, \angle 8$** **$\angle 8, \angle 9$**

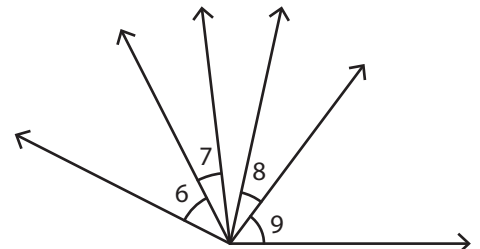
4)

 **$\angle 1, \angle 4$** **$\angle 2, \angle 3$**

5)

 **$\angle 5, \angle 6$** **$\angle 3, \angle 4$**

6)

 **$\angle 6, \angle 7$** **$\angle 8, \angle 9$**