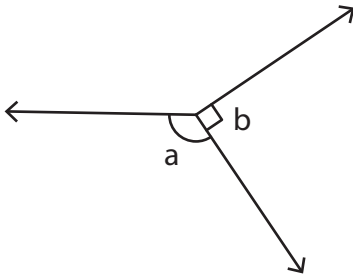


# Adjacent Angles

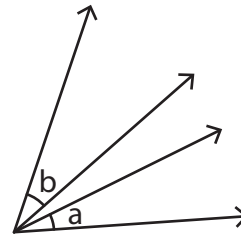
A) State whether the indicated angle pairs are adjacent or not.

1)



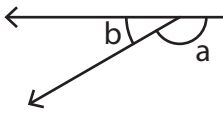
\_\_\_\_\_

2)



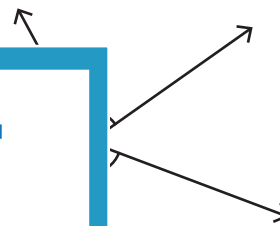
\_\_\_\_\_

3)



\_\_\_\_\_

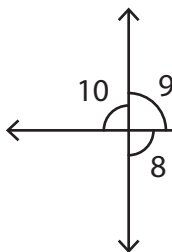
4)



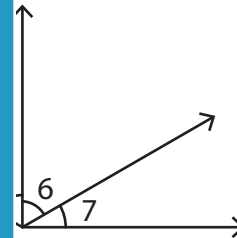
\_\_\_\_\_

B) Identify the two pairs of adjacent angles.

1)



\_\_\_\_\_



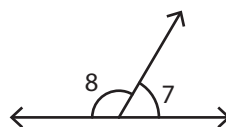
\_\_\_\_\_

C) 1) In which of the following pairs of angles are adjacent angles?

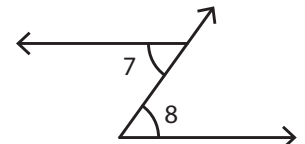
i)



ii)



iii)

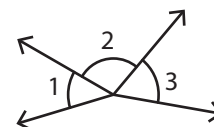


2) Which of the following pairs of angles are not adjacent?

i)  $\angle 1, \angle 3$

ii)  $\angle 1, \angle 2$

iii)  $\angle 2, \angle 3$



## PREVIEW

Gain complete access to the largest collection of worksheets in all subjects!

Members, please log in to download this worksheet.

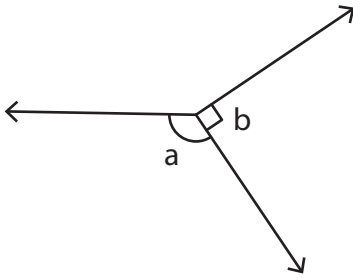
Not a member? Please sign up to gain complete access.

[www.mathworksheets4kids.com](http://www.mathworksheets4kids.com)

# Adjacent Angles

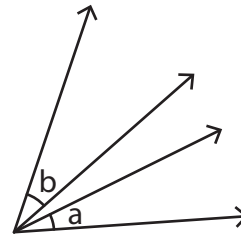
A) State whether the indicated angle pairs are adjacent or not.

1)



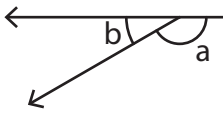
**adjacent**

2)



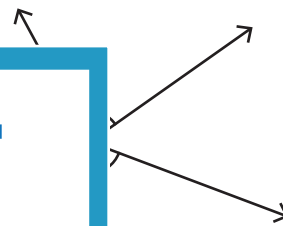
**not adjacent**

3)



**adjacent**

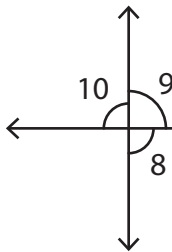
4)



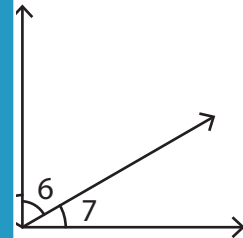
**adjacent**

B) Identify the two pairs of adjacent angles.

1)

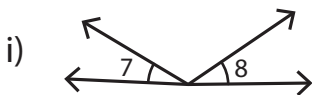


**∠8, ∠9 and ∠9, ∠10**

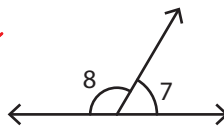


**∠6 and ∠6, ∠7**

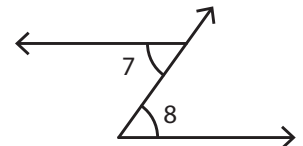
C) 1) In which of the following pairs of angles are adjacent angles?



ii)



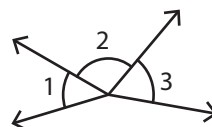
iii)



2) Which of the following pairs of angles are not adjacent?

i) ∠1, ∠3

ii) ∠1, ∠2



iii) ∠2, ∠3

**PREVIEW**

Gain complete access to the largest collection of worksheets in all subjects!

Members, please log in to download this worksheet.

Not a member? Please sign up to gain complete access.

[www.mathworksheets4kids.com](http://www.mathworksheets4kids.com)