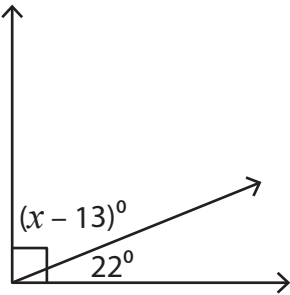


Complementary Angles

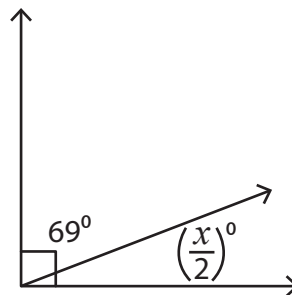
Find the value of x in each right angle.

1)



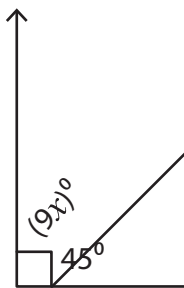
$x =$ _____

2)



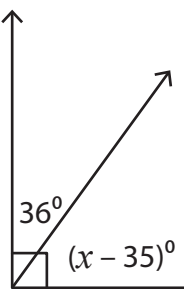
$x =$ _____

3)



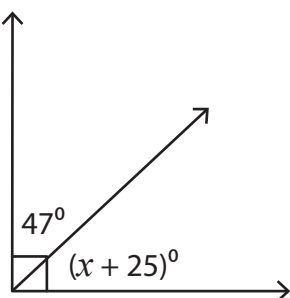
$x =$ _____

5)



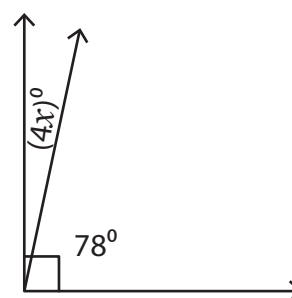
$x =$ _____

7)



$x =$ _____

8)



$x =$ _____

PREVIEW

Gain complete access to the largest collection of worksheets in all subjects!

Members, please log in to download this worksheet.

Not a member? Please sign up to gain complete access.

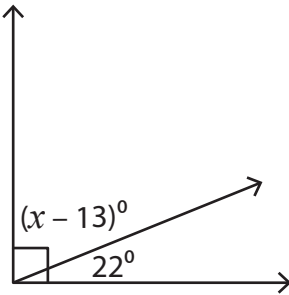
www.mathworksheets4kids.com

Name : _____

Complementary Angles

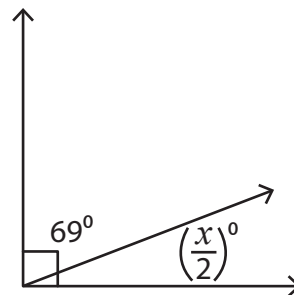
Find the value of x in each right angle.

1)



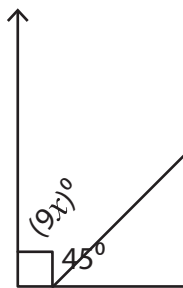
$x =$ 81

2)



$x =$ 42

3)



$x =$ 6

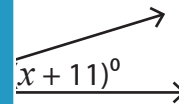
PREVIEW

Gain complete access to the largest collection of worksheets in all subjects!

Members, please log in to download this worksheet.

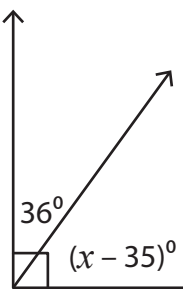
Not a member? Please sign up to gain complete access.

www.mathworksheets4kids.com




$x =$ 6

5)

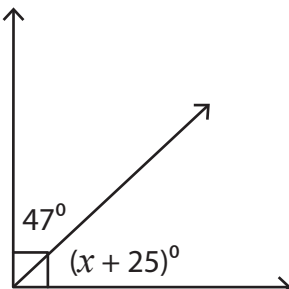


$x =$ 8



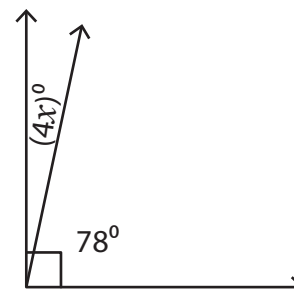
$x =$ 117

7)



$x =$ 18

8)



$x =$ 3