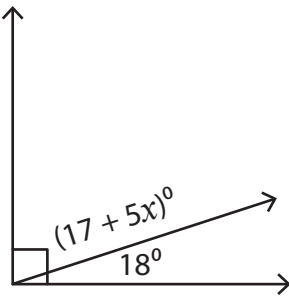


Name : _____

Complementary Angles

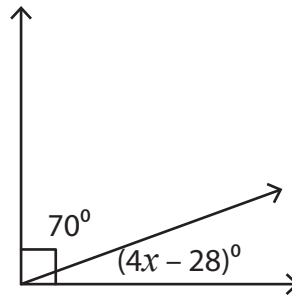
Find the value of x in each right angle.

1)



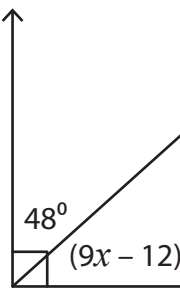
$x =$ _____

2)



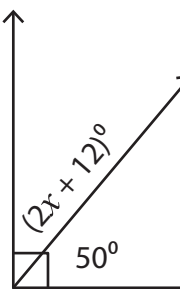
$x =$ _____

3)



$x =$ _____

5)



$x =$ _____

PREVIEW

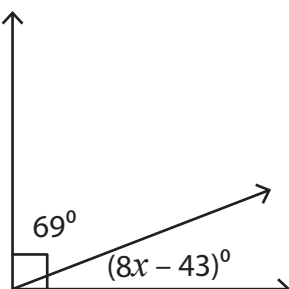
Gain complete access to the largest collection of worksheets in all subjects!

Members, please log in to download this worksheet.

Not a member? Please sign up to gain complete access.

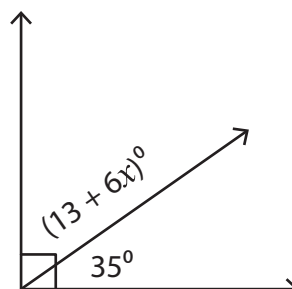
www.mathworksheets4kids.com

7)



$x =$ _____

8)



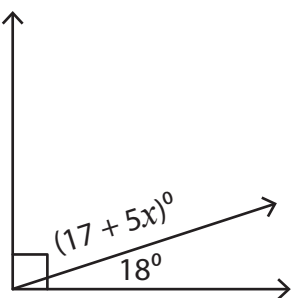
$x =$ _____

Name : _____

Complementary Angles

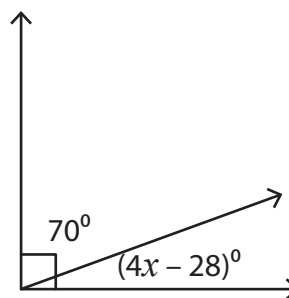
Find the value of x in each right angle.

1)



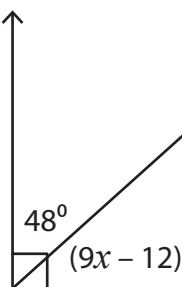
$x =$ 11

2)



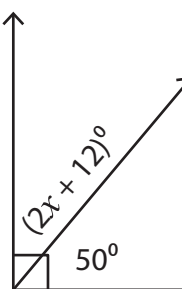
$x =$ 12

3)



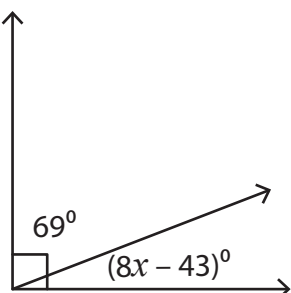
$x =$ 6

5)



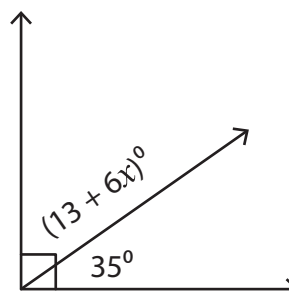
$x =$ 1

7)



$x =$ 8

8)



$x =$ 7

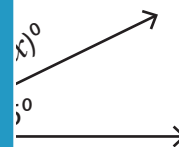
PREVIEW

Gain complete access to the largest collection of worksheets in all subjects!

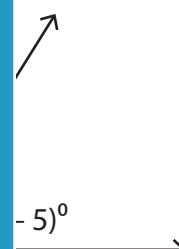
Members, please log in to download this worksheet.

Not a member? Please sign up to gain complete access.

www.mathworksheets4kids.com



$x =$ 19



$x =$ 9