

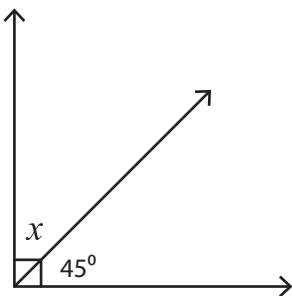
Name : _____

Finding Complementary Angles

Sheet 1

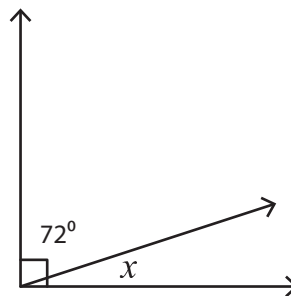
Find the value of x in each right angle.

1)



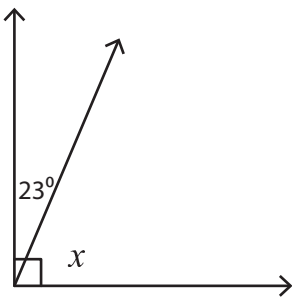
$x =$ _____

2)



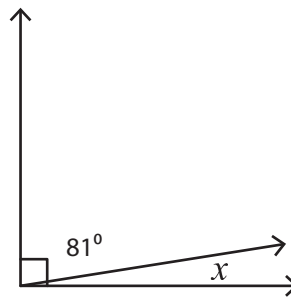
$x =$ _____

3)



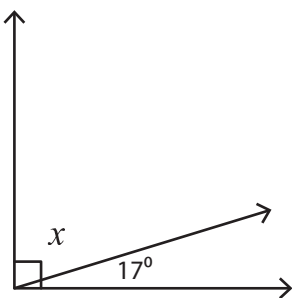
$x =$ _____

4)



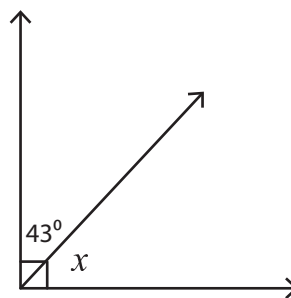
$x =$ _____

5)



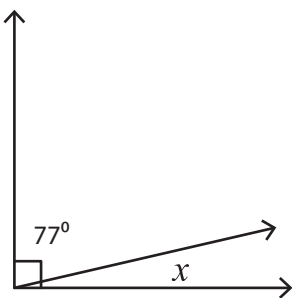
$x =$ _____

6)



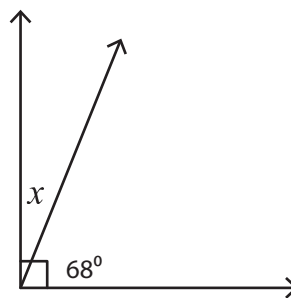
$x =$ _____

7)



$x =$ _____

8)



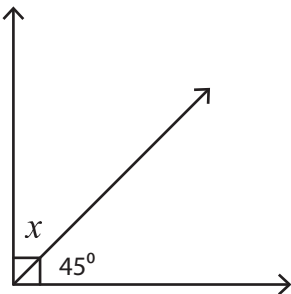
$x =$ _____

Name : _____

Finding Complementary Angles

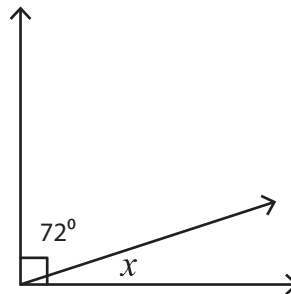
Find the value of x in each right angle.

1)



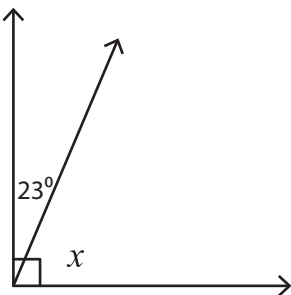
$x = 45^\circ$

2)



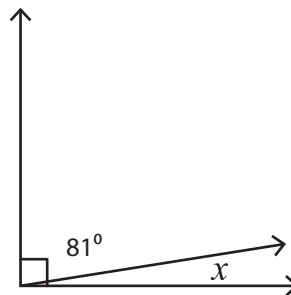
$x = 18^\circ$

3)



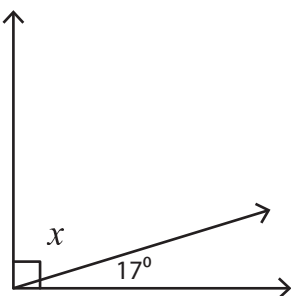
$x = 67^\circ$

4)



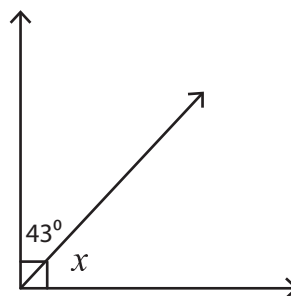
$x = 9^\circ$

5)



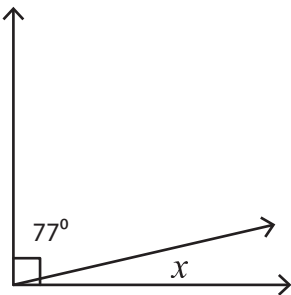
$x = 73^\circ$

6)



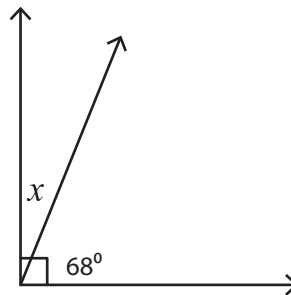
$x = 47^\circ$

7)



$x = 13^\circ$

8)



$x = 22^\circ$