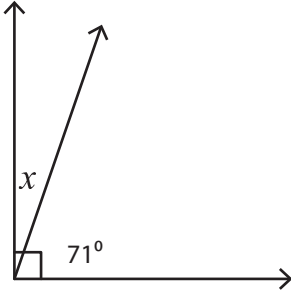


Finding Complementary Angles

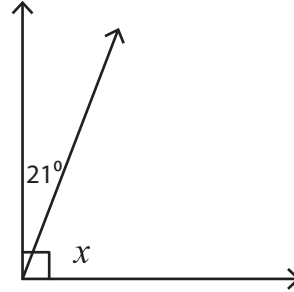
Find the value of x in each right angle.

1)



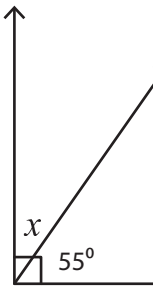
$x =$ _____

2)



$x =$ _____

3)



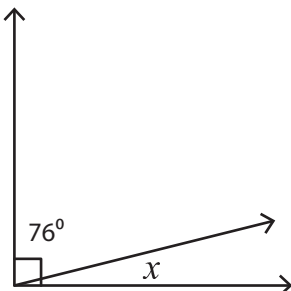
$x =$ _____

5)



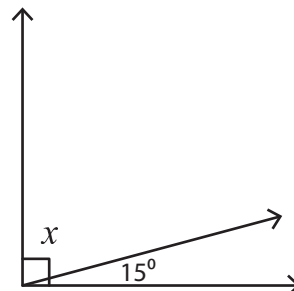
$x =$ _____

7)



$x =$ _____

8)



$x =$ _____

PREVIEW

Gain complete access to the largest collection of worksheets in all subjects!

Members, please log in to download this worksheet.

Not a member? Please sign up to gain complete access.

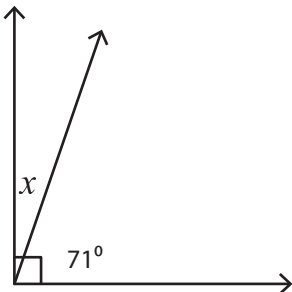
www.mathworksheets4kids.com

Name : _____

Finding Complementary Angles

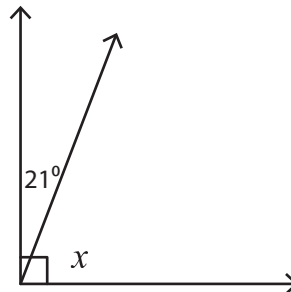
Find the value of x in each right angle.

1)



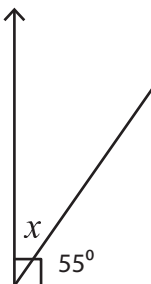
$x =$ 19°

2)



$x =$ 69°

3)



$x =$ _____

PREVIEW

Gain complete access to the largest collection of worksheets in all subjects!

Members, please log in to download this worksheet.

Not a member? Please sign up to gain complete access.

www.mathworksheets4kids.com

53°

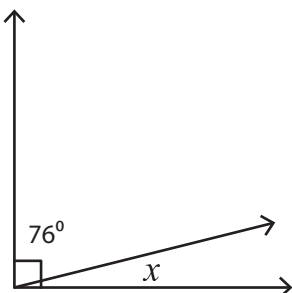
5)



$x =$ _____

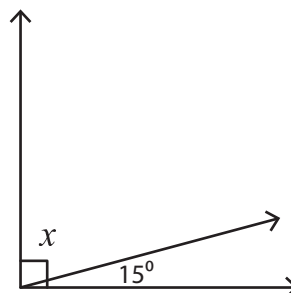
50°

7)



$x =$ 14°

8)



$x =$ 75°