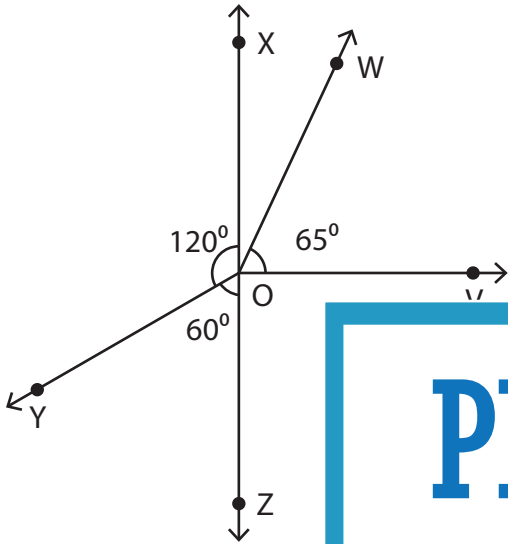


Complementary & Supplementary Angles

Observe the figure and answer the following.

1)

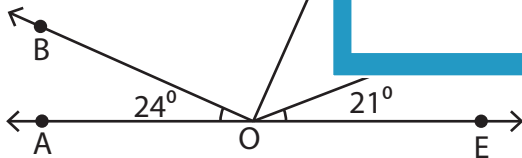


a) Name the angles adjacent to $\angle XOW$.

b) Name the supplement of $\angle YOZ$.

_____ complementary pair of

2)



c) Name the angle that is supplement to $\angle DOE$.

d) Find $m\angle DOB$.

PREVIEW

Gain complete access to the largest collection of worksheets in all subjects!

Members, please log in to download this worksheet.

Not a member? Please sign up to gain complete access.

www.mathworksheets4kids.com

_____ complementary pair of

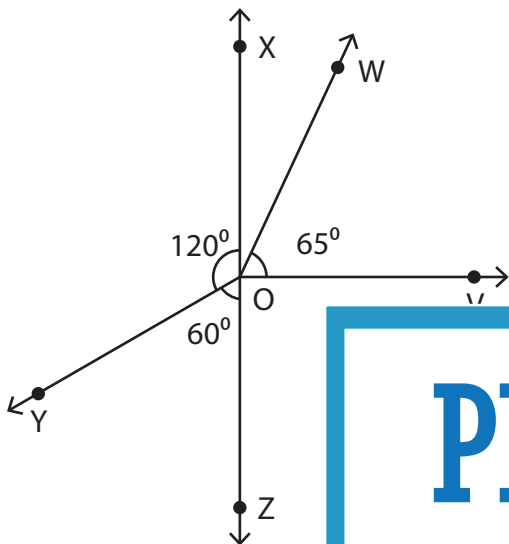
_____ to 21° .

Name : _____

Complementary & Supplementary Angles

Observe the figure and answer the following.

1)



a) Name the angles adjacent to $\angle XOW$.

$\angle XOY, \angle WOV$

b) Name the supplement of $\angle YOZ$.

$\angle XOY$

_____ complementary pair of

PREVIEW

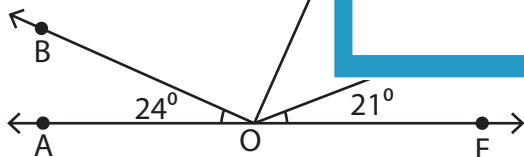
Gain complete access to the largest collection of worksheets in all subjects!

Members, please log in to download this worksheet.

Not a member? Please sign up to gain complete access.

www.mathworksheets4kids.com

2)



c) Name the angle that is supplement to $\angle DOE$.

$\angle AOD$

d) Find $m\angle DOB$.

135°

_____ complementary pair of

_____ 21° .