

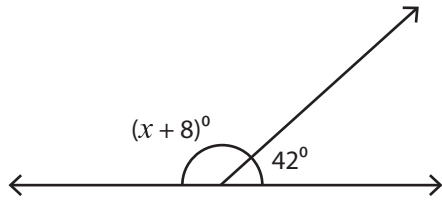
Name : _____

Complementary & Supplementary Angles

One-step: S3

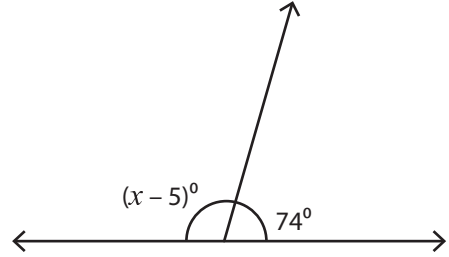
Find the value of x .

1)



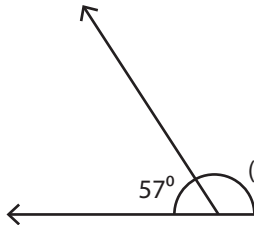
$x =$ _____

2)



$x =$ _____

3)



$x =$ _____

PREVIEW

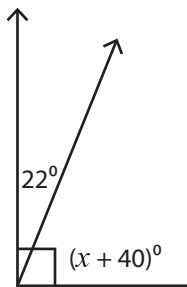
Gain complete access to the largest collection of worksheets in all subjects!

Members, please log in to download this worksheet.


Not a member? Please sign up to gain complete access.

www.mathworksheets4kids.com

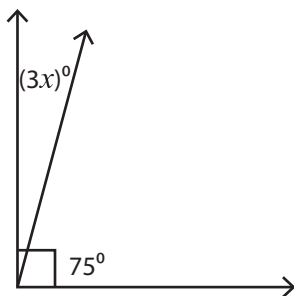
5)



$x =$ _____

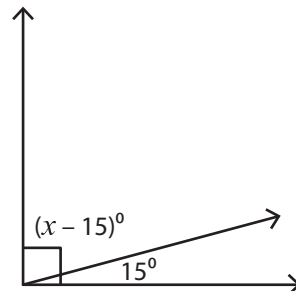


7)



$x =$ _____

8)



$x =$ _____

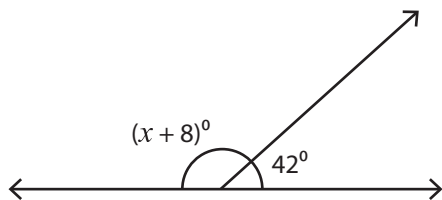
Name : _____

Complementary & Supplementary Angles

One-step: S3

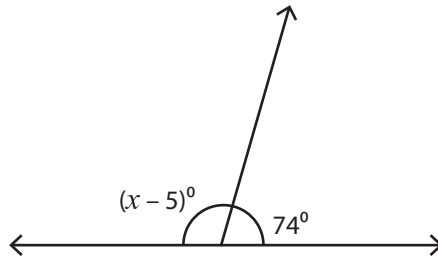
Find the value of x .

1)



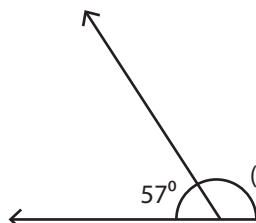
$x =$ 130

2)



$x =$ 111

3)



$x =$ 10

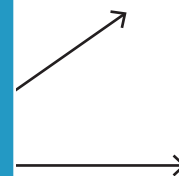
PREVIEW

Gain complete access to the largest collection of worksheets in all subjects!

Members, please log in to download this worksheet.

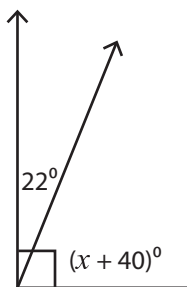
Not a member? Please sign up to gain complete access.

www.mathworksheets4kids.com



$x =$ 11

5)

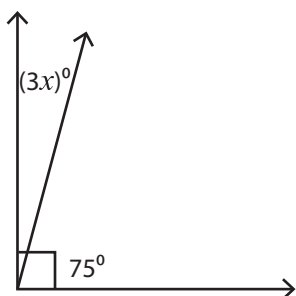


$x =$ 2



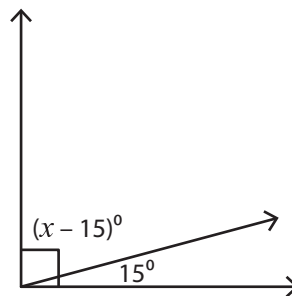
$x =$ 20

7)



$x =$ 5

8)



$x =$ 90