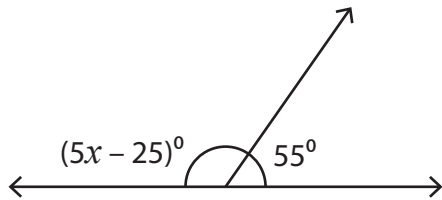


Name : _____

Supplementary Angles

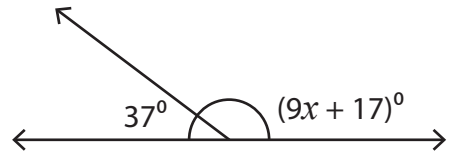
Find the value of x in each supplementary angle pair.

1)



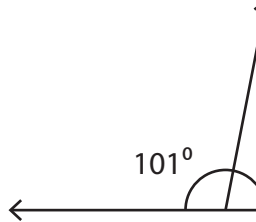
$x =$ _____

2)

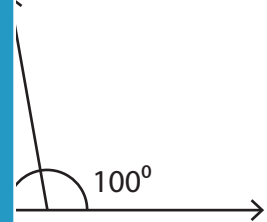


$x =$ _____

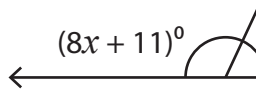
3)



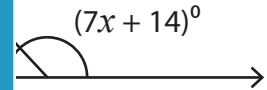
$x =$ _____



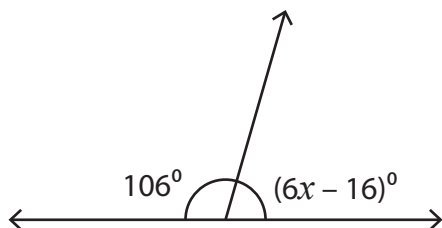
5)



$x =$ _____

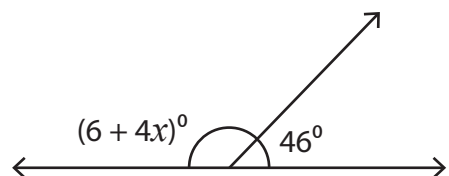


7)



$x =$ _____

8)



$x =$ _____

PREVIEW

Gain complete access to the largest collection of worksheets in all subjects!

Members, please log in to download this worksheet.

Not a member? Please sign up to gain complete access.

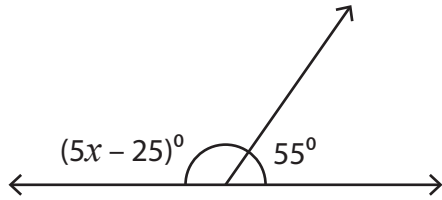
www.mathworksheets4kids.com

Name : _____

Supplementary Angles

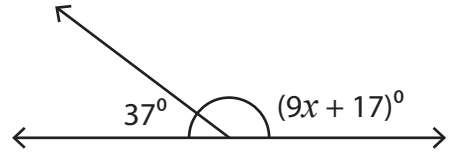
Find the value of x in each supplementary angle pair.

1)



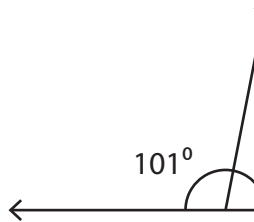
$x =$ **30**

2)

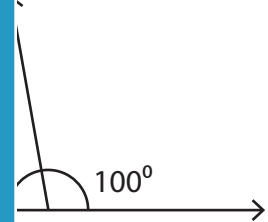


$x =$ **14**

3)

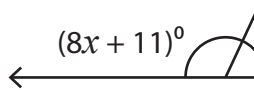


$x =$ **3**

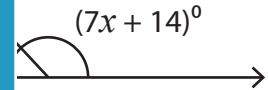


 56

5)



$x =$ **1**



 17

PREVIEW

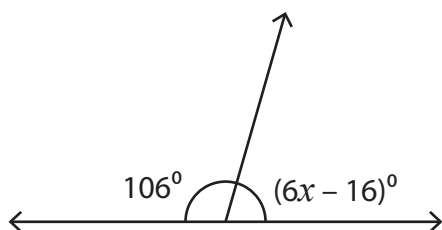
Gain complete access to the largest collection of worksheets in all subjects!

Members, please log in to download this worksheet.

Not a member? Please sign up to gain complete access.

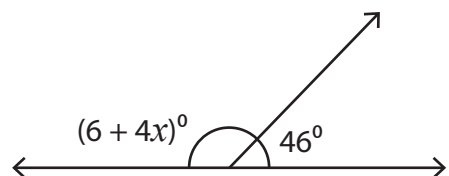
www.mathworksheets4kids.com

7)



$x =$ **15**

8)



$x =$ **32**