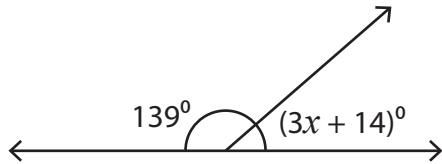


Name : _____

Supplementary Angles

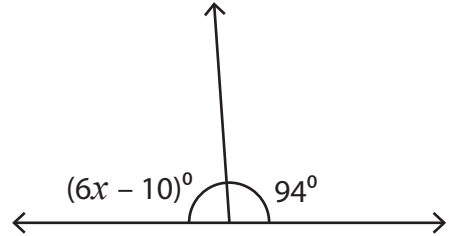
Find the value of x in each supplementary angle pair.

1)



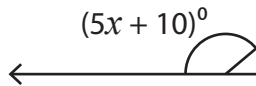
$x =$ _____

2)



$x =$ _____

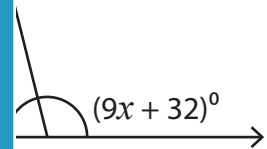
3)



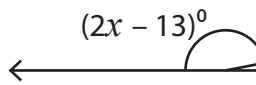
$x =$ _____

PREVIEW

Gain complete access to the largest collection of worksheets in all subjects!



5)

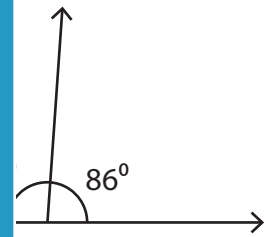


$x =$ _____

Members, please log in to download this worksheet.

Not a member? Please sign up to gain complete access.

www.mathworksheets4kids.com

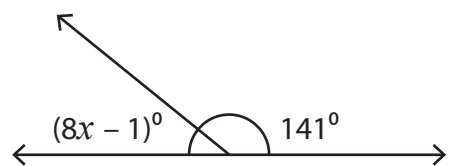


7)



$x =$ _____

8)



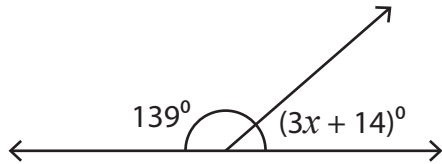
$x =$ _____

Name : _____

Supplementary Angles

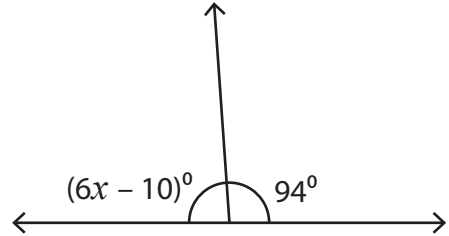
Find the value of x in each supplementary angle pair.

1)



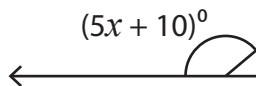
$x =$ 9

2)



$x =$ 16

3)



$x =$ 2

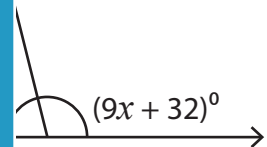
PREVIEW

Gain complete access to the largest collection of worksheets in all subjects!

Members, please log in to download this worksheet.

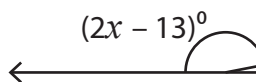
Not a member? Please sign up to gain complete access.

www.mathworksheets4kids.com

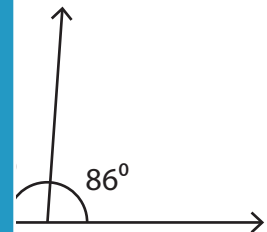


8

5)



$x =$ 9



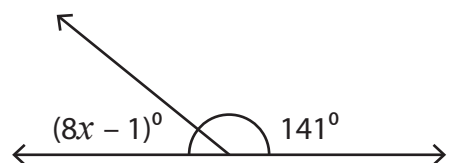
12

7)



$x =$ 34

8)



$x =$ 5