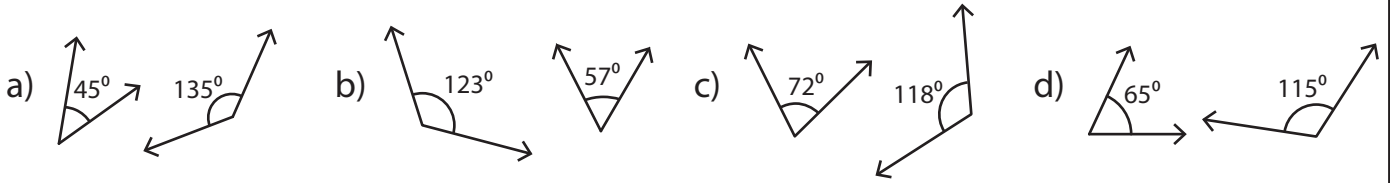


# Supplementary Angles

A) 1) Which pair of angles is not supplementary?



2) Which of the following pair of angles is supplementary?

- a)  $14^\circ, 175^\circ$       b)  $18^\circ, 162^\circ$       c)  $11^\circ, 179^\circ$       d)  $21^\circ, 163^\circ$

B) Match the following

1) Supplement of \_\_\_\_\_

174°

2) Supplement of \_\_\_\_\_

62°

3) Supplement of \_\_\_\_\_

137°

4) Supplement of \_\_\_\_\_

53°

## PREVIEW

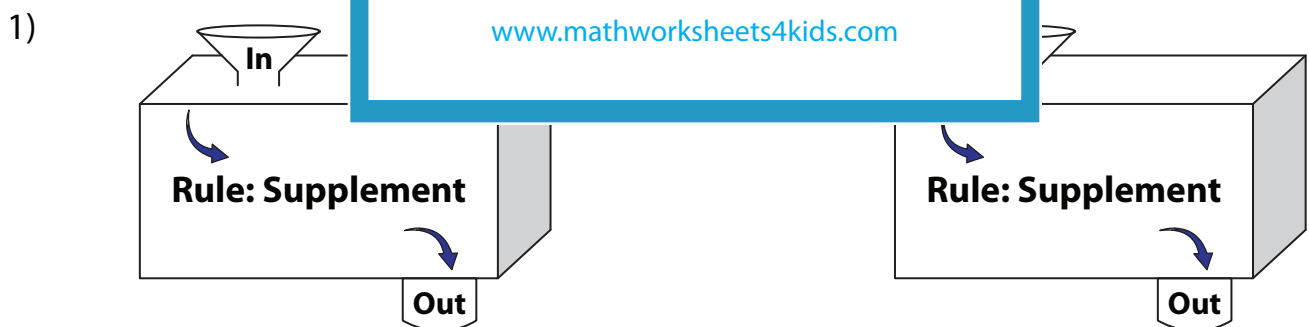
Gain complete access to the largest collection of worksheets in all subjects!

Members, please log in to download this worksheet.

Not a member? Please sign up to gain complete access.

[www.mathworksheets4kids.com](http://www.mathworksheets4kids.com)

C) Complete the in a



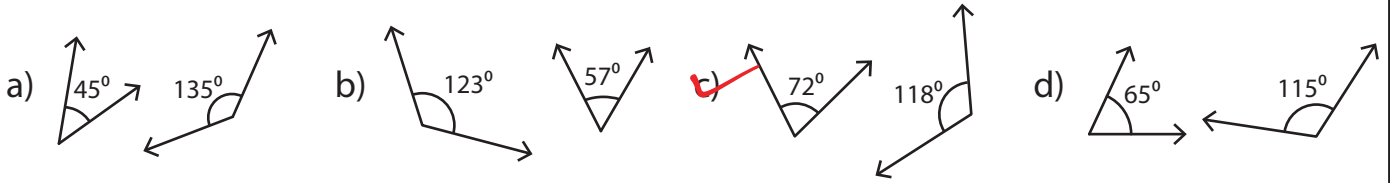
<b>In</b>	136°	82°	149°	51°
<b>Out</b>				

<b>In</b>	25°	7°	161°	108°
<b>Out</b>				

Name : \_\_\_\_\_

## Supplementary Angles

A) 1) Which pair of angles is not supplementary?



2) Which of the following pair of angles is supplementary?

- a)  $14^\circ, 175^\circ$       **b) ~~18^\circ, 162^\circ~~**      c)  $11^\circ, 179^\circ$       d)  $21^\circ, 163^\circ$

B) Match the following

1) Supplement of \_\_\_\_\_

174°

2) Supplement of \_\_\_\_\_

62°

3) Supplement of \_\_\_\_\_

137°

4) Supplement of \_\_\_\_\_

53°

# PREVIEW

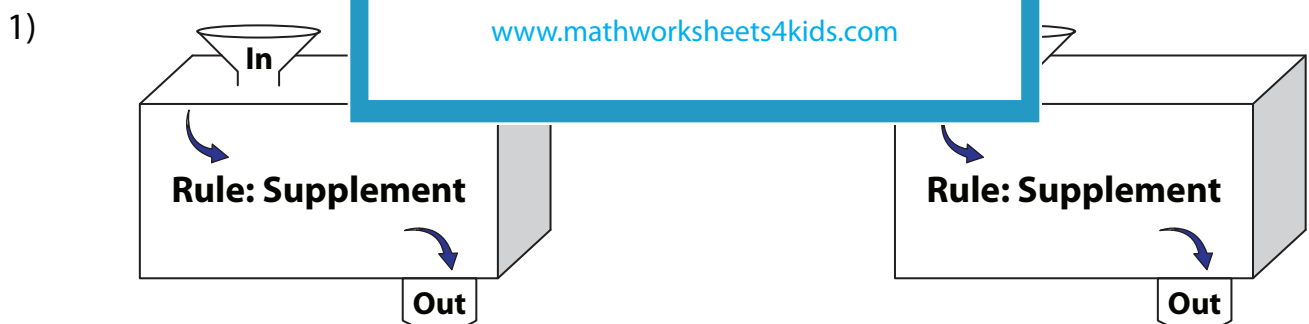
Gain complete access to the largest collection of worksheets in all subjects!

Members, please log in to download this worksheet.

Not a member? Please sign up to gain complete access.

[www.mathworksheets4kids.com](http://www.mathworksheets4kids.com)

C) Complete the in a



In	136°	82°	149°	51°
Out	<b>44°</b>	<b>98°</b>	<b>31°</b>	<b>129°</b>

In	25°	7°	161°	108°
Out	<b>155°</b>	<b>173°</b>	<b>19°</b>	<b>72°</b>