

Name : \_\_\_\_\_

## Drawing Angles

Sheet 1

Draw each angle using a protractor.

1)  $125^\circ$



2)  $37^\circ$



3)  $66^\circ$



4)  $140^\circ$



5)  $153^\circ$



6)  $82^\circ$

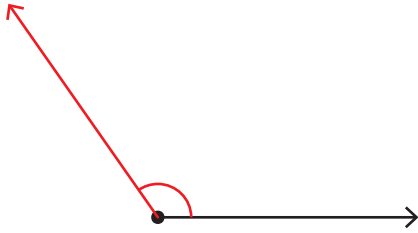


Name : \_\_\_\_\_

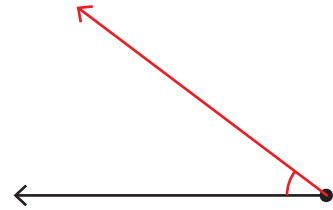
# Drawing Angles

Draw each angle using a protractor.

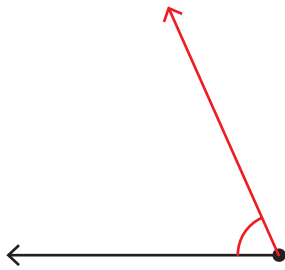
1)  $125^\circ$




2)  $37^\circ$



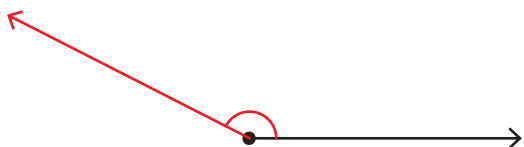
3)  $66^\circ$



4)  $140^\circ$



5)  $153^\circ$



6)  $82^\circ$

