

Name : \_\_\_\_\_

## Drawing Angles - 5° Increments

Sheet 3

Draw each angle using a protractor.

1)  $40^\circ$

2)  $105^\circ$

3)  $165^\circ$

5)  $80^\circ$

**PREVIEW**

Gain complete access to the largest collection of worksheets in all subjects!

Members, please log in to download this worksheet.

Not a member? Please sign up to gain complete access.

[www.mathworksheets4kids.com](http://www.mathworksheets4kids.com)

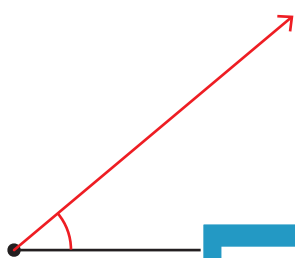
Name : \_\_\_\_\_

# Drawing Angles - 5° Increments

Draw each angle using a protractor.

1)  $40^\circ$

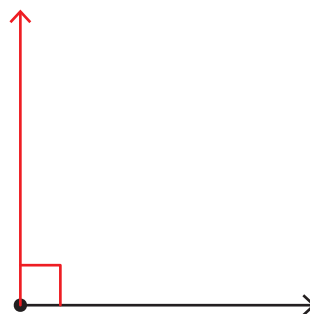
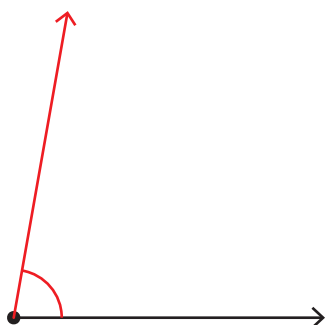
2)  $105^\circ$



3)  $165^\circ$



5)  $80^\circ$



**PREVIEW**

Gain complete access to the largest collection of worksheets in all subjects!

Members, please log in to download this worksheet.

Not a member? Please sign up to gain complete access.

[www.mathworksheets4kids.com](http://www.mathworksheets4kids.com)