

Name : _____

Drawing Angles - 5° Increments

Sheet 4

Draw each angle using a protractor.

1) 95°

2) 15°

3) 70°

5) 130°

PREVIEW

Gain complete access to the largest collection of worksheets in all subjects!

Members, please log in to download this worksheet.

Not a member? Please sign up to gain complete access.


www.mathworksheets4kids.com

Name : _____


Drawing Angles - 5° Increments

Draw each angle using a protractor.

1) 95°



2) 15°



3) 70°




PREVIEW

Gain complete access to the largest collection of worksheets in all subjects!

Members, please log in to download this worksheet.

Not a member? Please sign up to gain complete access.

www.mathworksheets4kids.com



5) 130°

