

Name : _____

Drawing Reflex Angles


Sheet 1

Draw each reflex angle using a protractor.

1) 195°



2) 300°



3) 327°



4) 209°



5) 264°



6) 341°

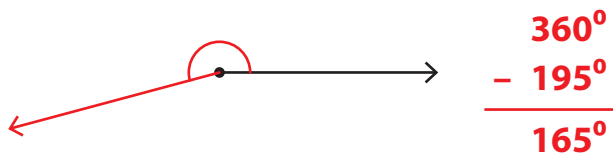


Name : _____

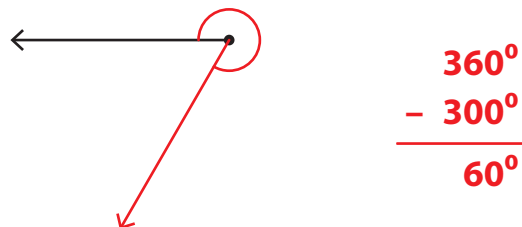
Drawing Reflex Angles

Draw each reflex angle using a protractor.

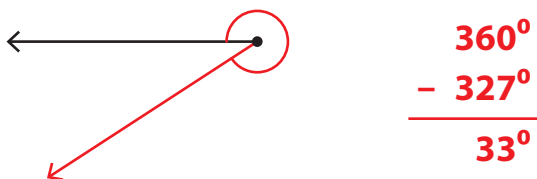
1) 195°




2) 300°



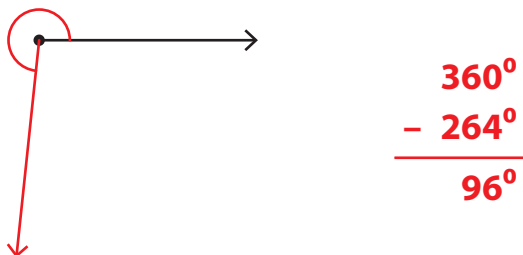
3) 327°



4) 209°



5) 264°



6) 341°

