

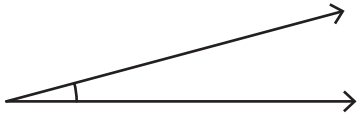
Name : \_\_\_\_\_

# Estimating Angles

Sheet 1

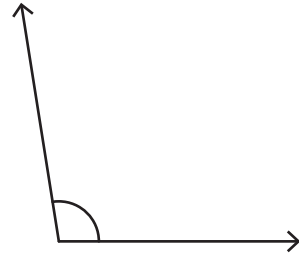
Estimate the measure of each angle.

1)



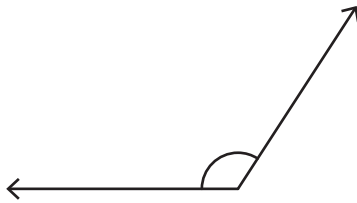
\_\_\_\_\_

2)



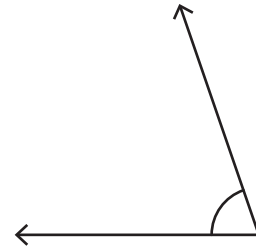
\_\_\_\_\_

3)



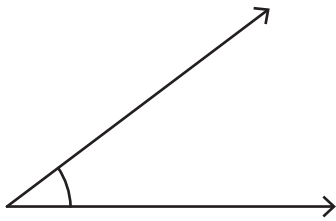
\_\_\_\_\_

4)



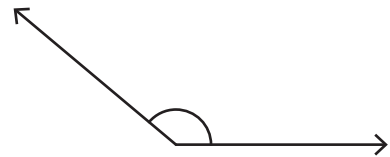
\_\_\_\_\_

5)



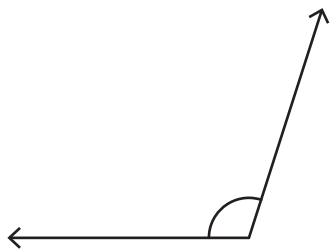
\_\_\_\_\_

6)



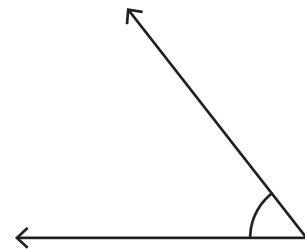
\_\_\_\_\_

7)



\_\_\_\_\_

8)



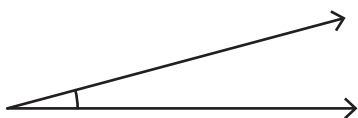
\_\_\_\_\_

Name : \_\_\_\_\_

Estimating Angles

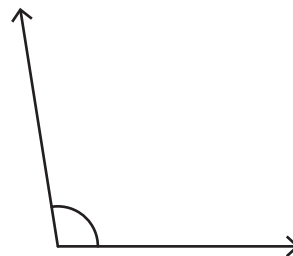
Estimate the measure of each angle.

1)



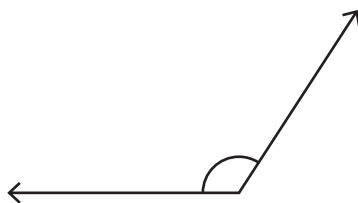
$11^\circ - 19^\circ$

2)



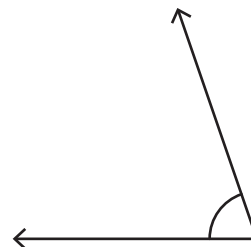
$95^\circ - 103^\circ$

3)



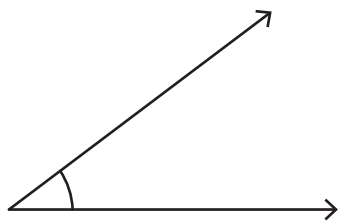
$119^\circ - 127^\circ$

4)



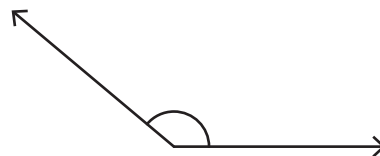
$67^\circ - 75^\circ$

5)



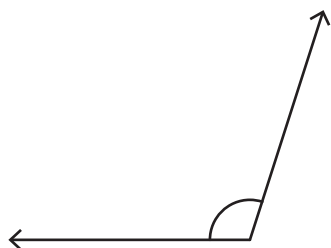
$33^\circ - 41^\circ$

6)



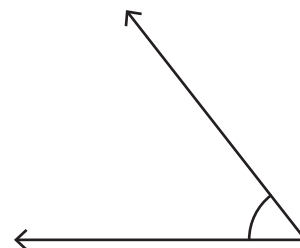
$136^\circ - 144^\circ$

7)



$104^\circ - 112^\circ$

8)



$48^\circ - 56^\circ$