

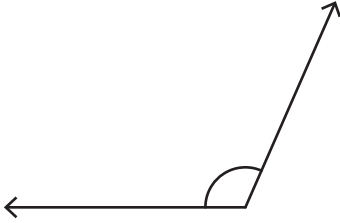
Name : _____

Estimating Angles

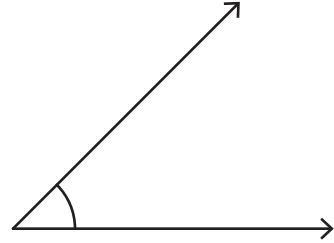
Sheet 2

Estimate the measure of each angle.

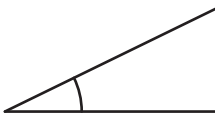
1)



2)



3)




PREVIEW

Gain complete access to the largest collection of worksheets in all subjects!


Members, please log in to download this worksheet.

Not a member? Please sign up to gain complete access.

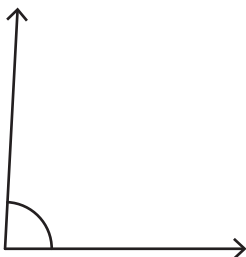
www.mathworksheets4kids.com



5)



7)



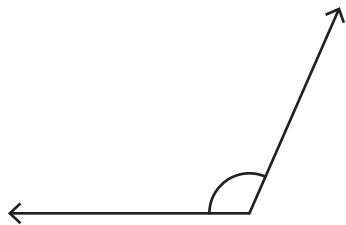
8)



Estimating Angles

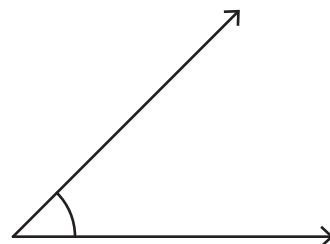
Estimate the measure of each angle.

1)



110° - 118°

2)




41° - 49°

3)




22° - 30°




135° - 143°

5)



148° - 156°



59° - 67°

PREVIEW

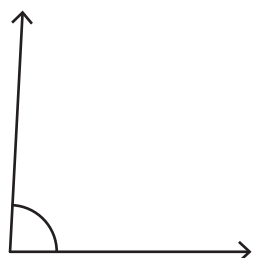
Gain complete access to the largest collection of worksheets in all subjects!

Members, please log in to download this worksheet.

Not a member? Please sign up to gain complete access.

www.mathworksheets4kids.com

7)



83° - 91°

8)



166° - 174°