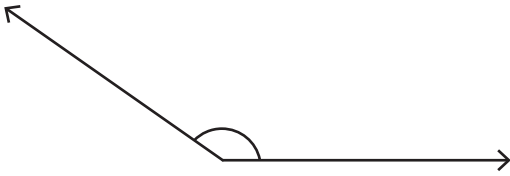


# Estimating Angles

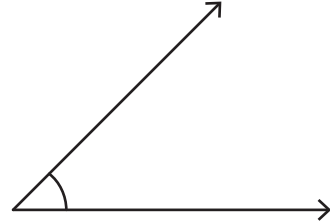
Choose the best estimation for the measure of each angle.

1)



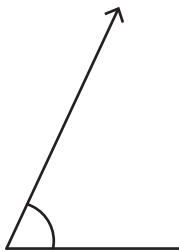
- a)  $130^\circ$  approx
- b)  $145^\circ$  approx
- c)  $150^\circ$  approx

2)



- a)  $25^\circ$  approx
- b)  $30^\circ$  approx
- c)  $35^\circ$  approx

3)



- a)  $55^\circ$  approx
- b)  $65^\circ$  approx
- c)  $70^\circ$  approx

## PREVIEW

Gain complete access to the largest collection of worksheets in all subjects!

Members, please log in to download this worksheet.

Not a member? Please sign up to gain complete access.

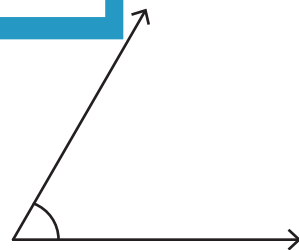
[www.mathworksheets4kids.com](http://www.mathworksheets4kids.com)

- a)  $55^\circ$  approx
- b)  $60^\circ$  approx
- c)  $5^\circ$  approx

5)



- a)  $160^\circ$  approx
- b)  $170^\circ$  approx
- c)  $175^\circ$  approx



- a)  $60^\circ$  approx
- b)  $80^\circ$  approx
- c)  $85^\circ$  approx

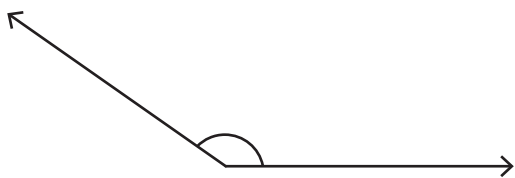
Name : \_\_\_\_\_

# Estimating Angles

ES1

Choose the best estimation for the measure of each angle.

1)

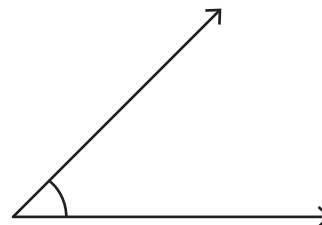


a)  $130^\circ$  approx

b)  $145^\circ$  approx

c)  $150^\circ$  approx

2)

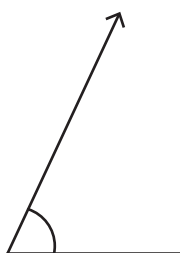


a)  $25^\circ$  approx

b)  $30^\circ$  approx

c)  $35^\circ$  approx

3)



a)  $55^\circ$  approx

b)  $65^\circ$  approx

c)  $70^\circ$  approx

d)  $75^\circ$  approx

e)  $80^\circ$  approx

f)  $85^\circ$  approx

**PREVIEW**

Gain complete access to the largest collection of worksheets in all subjects!

Members, please log in to download this worksheet.

Not a member? Please sign up to gain complete access.

[www.mathworksheets4kids.com](http://www.mathworksheets4kids.com)

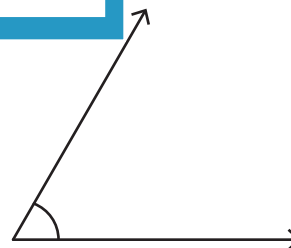
5)



a)  $160^\circ$  approx

b)  $170^\circ$  approx

c)  $175^\circ$  approx



a)  $60^\circ$  approx

b)  $80^\circ$  approx

c)  $85^\circ$  approx