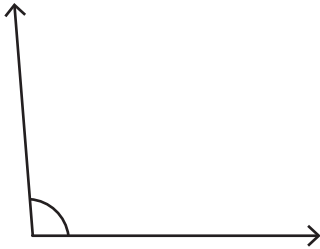


# Estimating Angles

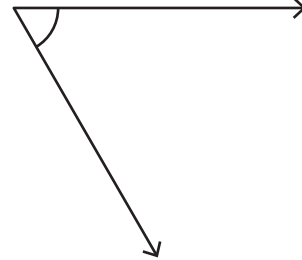
Choose the best estimation for the measure of each angle.

1)



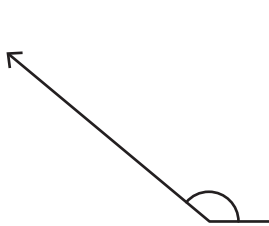
- a)  $90^\circ$  approx
- b)  $100^\circ$  approx
- c)  $95^\circ$  approx

2)



- a)  $60^\circ$  approx
- b)  $70^\circ$  approx
- c)  $80^\circ$  approx

3)



- a)  $115^\circ$  approx
- b)  $125^\circ$  approx
- c)  $140^\circ$  approx



- a)  $105^\circ$  approx
- b)  $115^\circ$  approx
- c)  $130^\circ$  approx

5)



- a)  $160^\circ$  approx
- b)  $180^\circ$  approx
- c)  $200^\circ$  approx



- a)  $100^\circ$  approx
- b)  $105^\circ$  approx
- c)  $95^\circ$  approx

**PREVIEW**

Gain complete access to the largest collection of worksheets in all subjects!

Members, please log in to download this worksheet.

Not a member? Please sign up to gain complete access.

[www.mathworksheets4kids.com](http://www.mathworksheets4kids.com)