

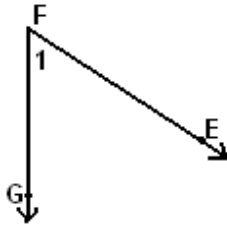
Student Name: _____

Score: _____

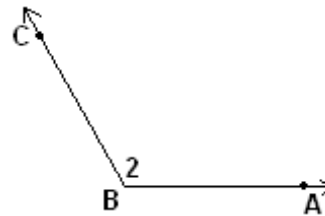
Name the Angles

Represent each angle in four different ways:

Example:



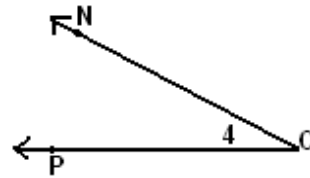
Answer: $\angle 1$, $\angle F$, $\angle EFG$ and $\angle GFE$



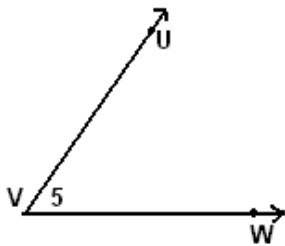
Answer: _____



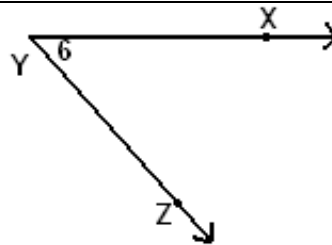
Answer: _____



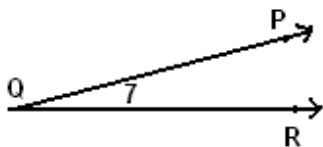
Answer: _____



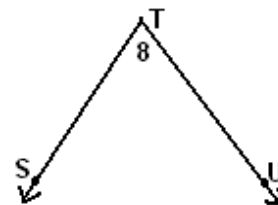
Answer: _____



Answer: _____



Answer: _____



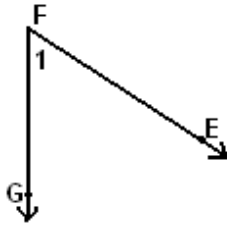
Answer: _____

Student Name: _____

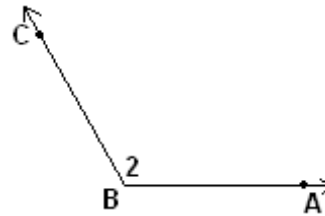
Score: _____

Answers

Example:



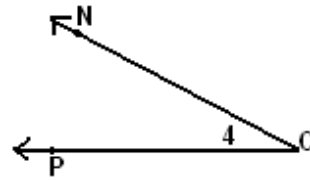
Answer: $\angle 1$, $\angle F$, $\angle EFG$ and $\angle GFE$



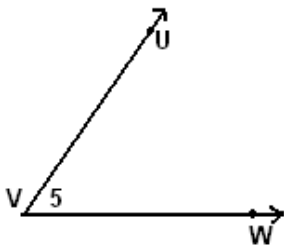
Answer: $\angle 2$, $\angle B$, $\angle CBA$ and $\angle ABC$



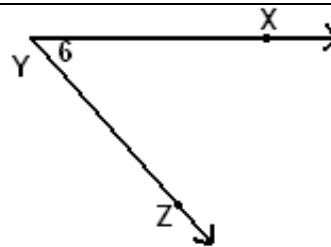
Answer: $\angle 3$, $\angle M$, $\angle LMN$ and $\angle NML$



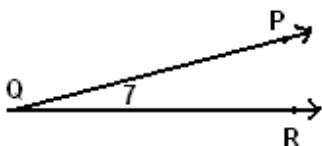
Answer: $\angle 4$, $\angle O$, $\angle NOP$ and $\angle PON$



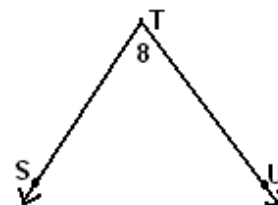
Answer: $\angle 5$, $\angle V$, $\angle UVW$ and $\angle WVU$



Answer: $\angle 6$, $\angle Y$, $\angle XYZ$ and $\angle ZYX$



Answer: $\angle 7$, $\angle Q$, $\angle PQR$ and $\angle RQP$



Answer: $\angle 8$, $\angle T$, $\angle STU$ and $\angle UTS$