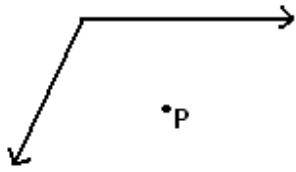


Student Name: _____

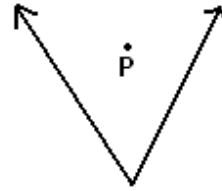
Score: _____

Interior, Exterior and On the Angle

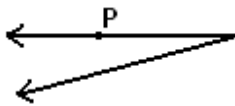
State whether the each point is *interior*, *exterior* or *on* the angle:



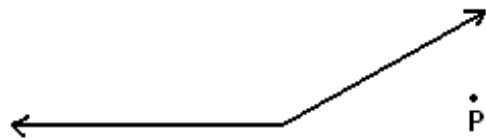
Answer: _____



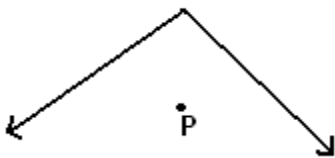
Answer: _____



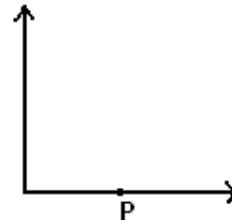
Answer: _____



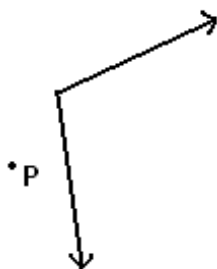
Answer: _____



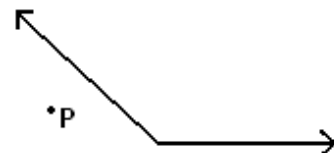
Answer: _____



Answer: _____



Answer: _____

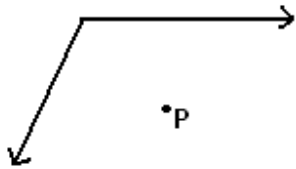


Answer: _____

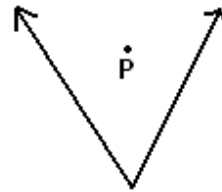
Student Name: _____

Score: _____

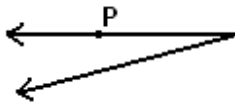
Answers




Answer: Interior



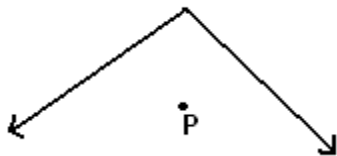
Answer: Interior



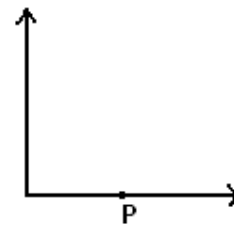
Answer: On the angle



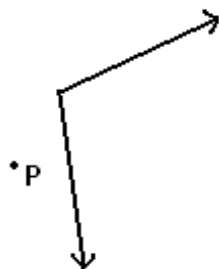
Answer: Exterior



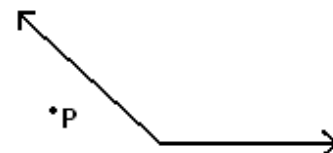
Answer: Interior



Answer: On the angle



Answer: Exterior



Answer: Exterior