

Name : \_\_\_\_\_

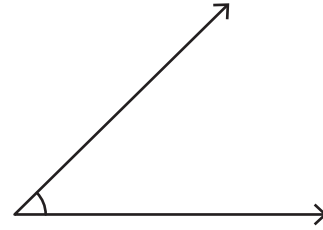
## Drawing Angles & Marking Points

Sheet 1

1) Draw an angle having the point H in its exterior.

H  
•

2) Mark a point F in the interior of the angle.



3) Mark a point P in the interior of the angle.

the angle.

# PREVIEW

Gain complete access to the largest collection of worksheets in all subjects!

Members, please log in to download this worksheet.

Not a member? Please sign up to gain complete access.

[www.mathworksheets4kids.com](http://www.mathworksheets4kids.com)

5) Mark a point M on the angle.

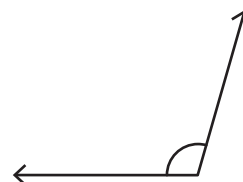
Marking the point Q in its interior.

Q  
•

7) Draw an angle with the point F lying on it.

8) Mark a point N in the exterior of the angle.

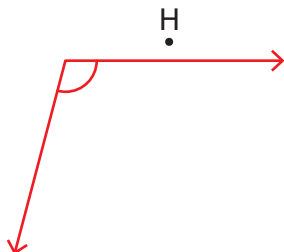
F  
•



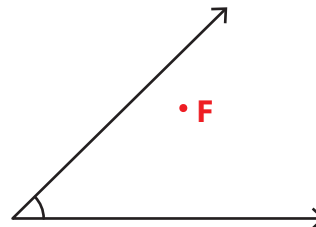
Name : \_\_\_\_\_

Drawing Angles & Marking Points

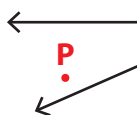
1) Draw an angle having the point H in its exterior.



2) Mark a point F in the interior of the angle.



3) Mark a point P in the interior of the angle.



**PREVIEW**

Gain complete access to the largest collection of worksheets in all subjects!

Members, please log in to download this worksheet.

Not a member? Please sign up to gain complete access.

[www.mathworksheets4kids.com](http://www.mathworksheets4kids.com)

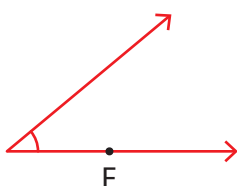
5) Mark a point M on the angle.



6) Mark the point Q in its interior.



7) Draw an angle with the point F lying on it.



8) Mark a point N in the exterior of the angle.

