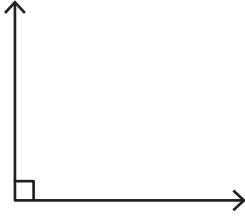


Name : _____

Drawing Angles & Marking Points

Sheet 2

1) Mark a point S on the angle.



2) Draw an angle having the point N in its exterior.

•
N

3) Draw an angle having the

PREVIEW

Gain complete access to the largest collection of worksheets in all subjects!

Members, please log in to download this worksheet.

Not a member? Please sign up to gain complete access.

www.mathworksheets4kids.com

the interior of the angle.



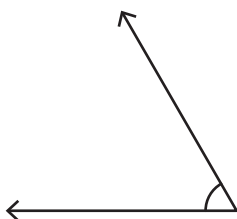
5) Mark a point J on the angle



ing the point R in its exterior.

•
R

7) Mark a point C in the exterior of the angle.



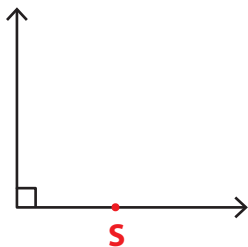
8) Draw an angle with the point H lying on it.

•
H

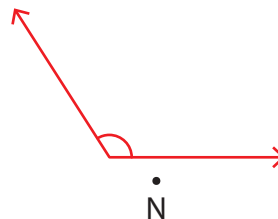
Name : _____

Drawing Angles & Marking Points

1) Mark a point S on the angle.



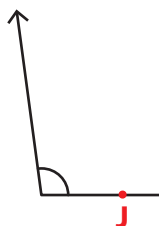
2) Draw an angle having the point N in its exterior.



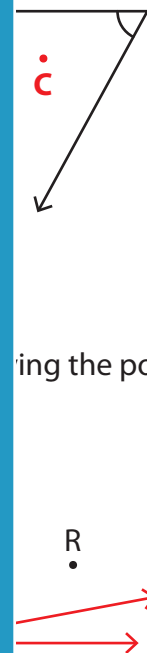
3) Draw an angle having the point C in its interior.



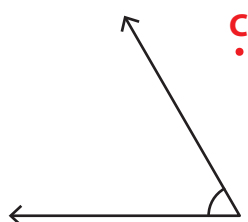
5) Mark a point J on the angle.



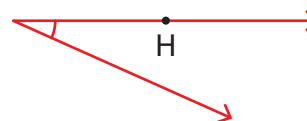
6) Draw an angle having the point R in its exterior.



7) Mark a point C in the exterior of the angle.



8) Draw an angle with the point H lying on it.



PREVIEW

Gain complete access to the largest collection of worksheets in all subjects!

Members, please log in to download this worksheet.

Not a member? Please sign up to gain complete access.

www.mathworksheets4kids.com