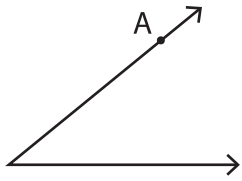


Name : _____

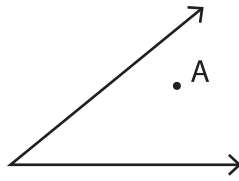
Interior and Exterior of an Angle

Example 1



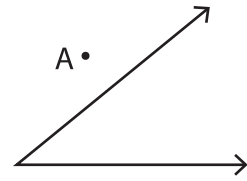
A is on the angle

Example 2



A is in the interior

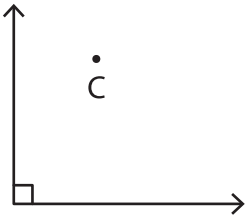
Example 3



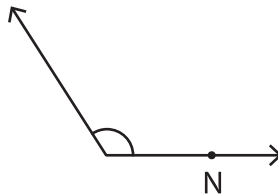
A is in the exterior

Identify if the given point is in the interior, exterior, or on the angle.

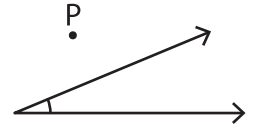
1)



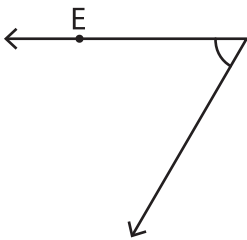
2)



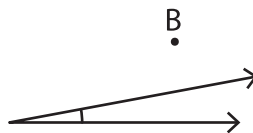
3)



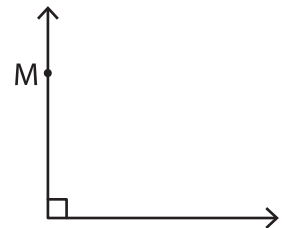
4)



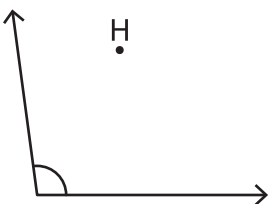
5)



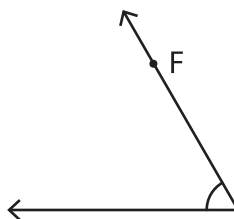
6)



7)



8)



9)

