

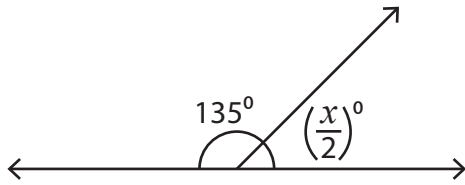
Name : _____

Linear Pairs

One-Step: S2

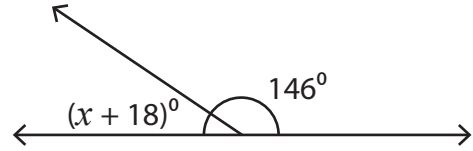
Find the value of x .

1)



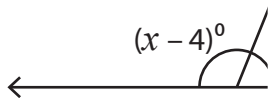
$x =$ _____

2)

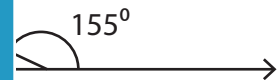


$x =$ _____

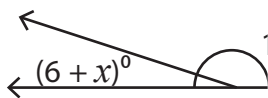
3)



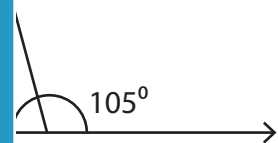
$x =$ _____



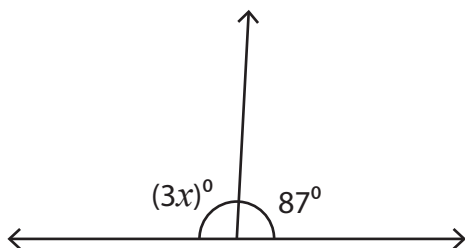
5)



$x =$ _____

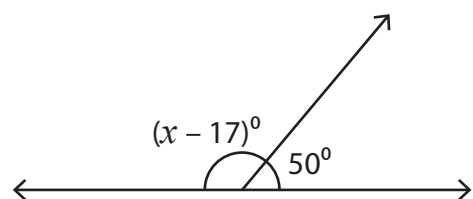


7)



$x =$ _____

8)



$x =$ _____

PREVIEW

Gain complete access to the largest collection of worksheets in all subjects!

Members, please log in to download this worksheet.

Not a member? Please sign up to gain complete access.

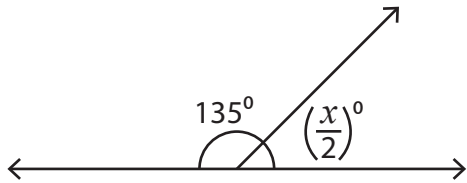
www.mathworksheets4kids.com

Name : _____

Linear Pairs

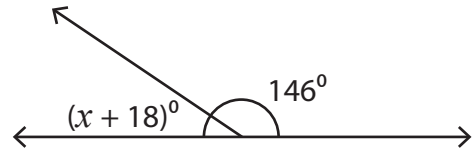
Find the value of x .

1)



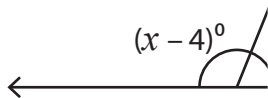
$x = \underline{90}$

2)

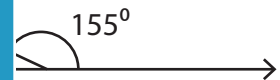


$x = \underline{16}$

3)

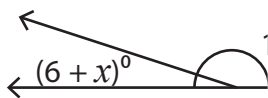


$x = \underline{11}$

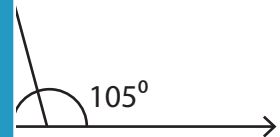


$\underline{5}$

5)



$x = \underline{1}$



$\underline{225}$

PREVIEW

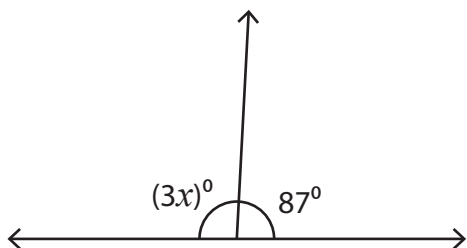
Gain complete access to the largest collection of worksheets in all subjects!

Members, please log in to download this worksheet.

Not a member? Please sign up to gain complete access.

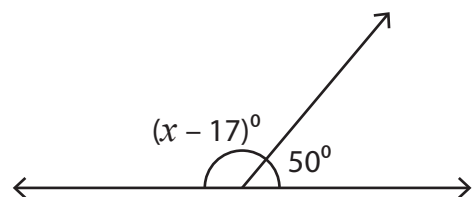
www.mathworksheets4kids.com

7)



$x = \underline{31}$

8)



$x = \underline{147}$