

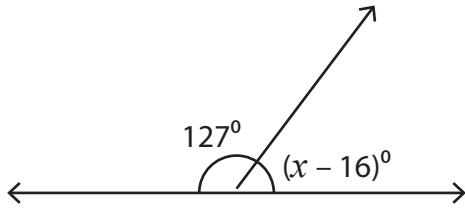
Name : \_\_\_\_\_

## Linear Pairs

One-Step: S3

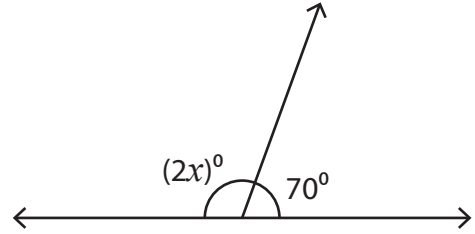
Find the value of  $x$ .

1)



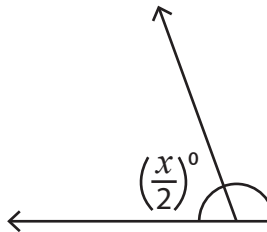
$x =$  \_\_\_\_\_

2)



$x =$  \_\_\_\_\_

3)



$x =$  \_\_\_\_\_

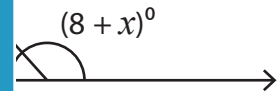
# PREVIEW

Gain complete access to the largest collection of worksheets in all subjects!

Members, please log in to download this worksheet.

Not a member? Please sign up to gain complete access.

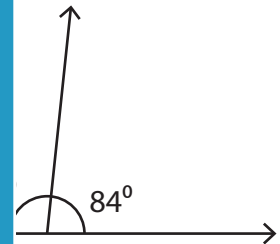
[www.mathworksheets4kids.com](http://www.mathworksheets4kids.com)



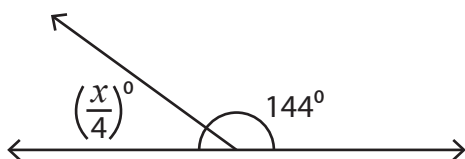
5)



$x =$  \_\_\_\_\_

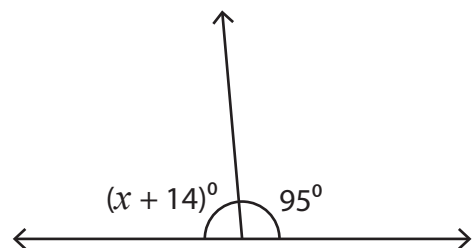


7)



$x =$  \_\_\_\_\_

8)



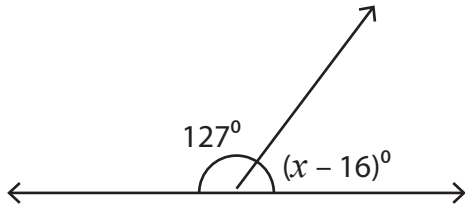
$x =$  \_\_\_\_\_

Name : \_\_\_\_\_

Linear Pairs

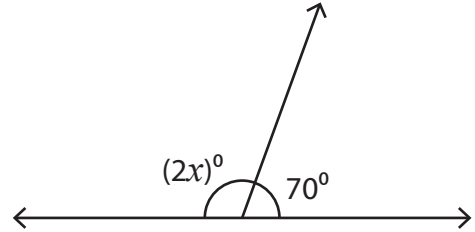
Find the value of  $x$ .

1)



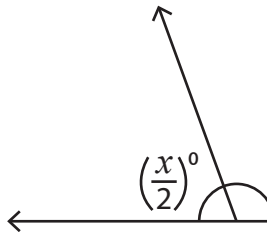
$x = \underline{69}$

2)

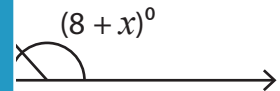


$x = \underline{55}$

3)



$x = \underline{14}$

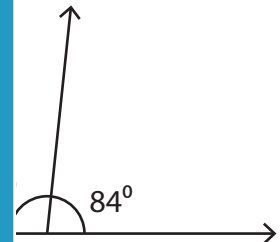


$\underline{124}$

5)

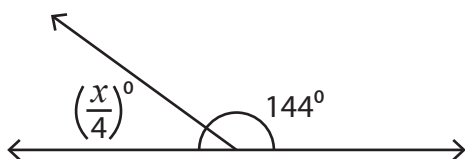


$x = \underline{1}$



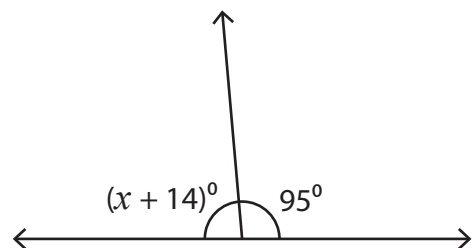
$\underline{105}$

7)



$x = \underline{144}$

8)



$x = \underline{71}$

**PREVIEW**

Gain complete access to the largest collection of worksheets in all subjects!

Members, please log in to download this worksheet.

Not a member? Please sign up to gain complete access.

[www.mathworksheets4kids.com](http://www.mathworksheets4kids.com)