

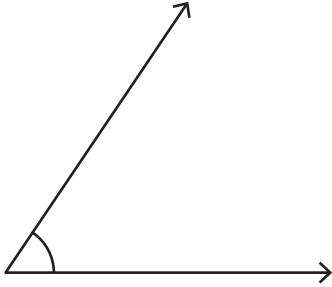
Name : \_\_\_\_\_

# Measuring Angles

Inner scale: S1

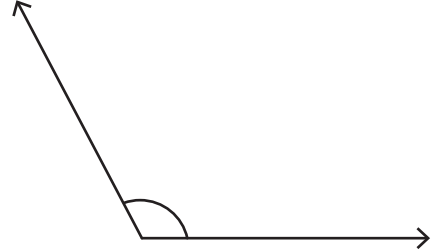
Measure each angle using a protractor.

1)



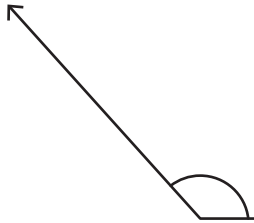
Angle: \_\_\_\_\_

2)



Angle: \_\_\_\_\_

3)



Angle: \_\_\_\_\_

# PREVIEW

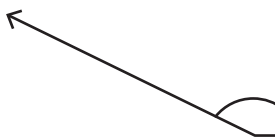
Gain complete access to the largest collection of worksheets in all subjects!

Members, please log in to download this worksheet.

Not a member? Please sign up to gain complete access.

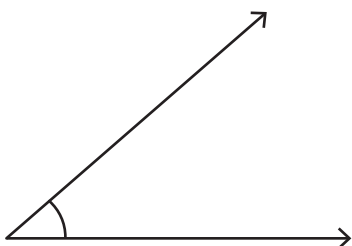
[www.mathworksheets4kids.com](http://www.mathworksheets4kids.com)

5)



Angle: \_\_\_\_\_

7)



Angle: \_\_\_\_\_

8)



Angle: \_\_\_\_\_

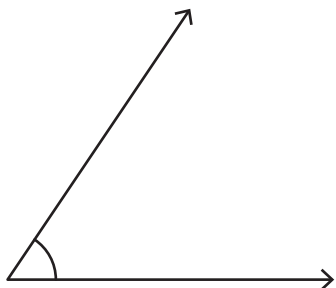
Name : \_\_\_\_\_

# Measuring Angles

Inner scale: S1

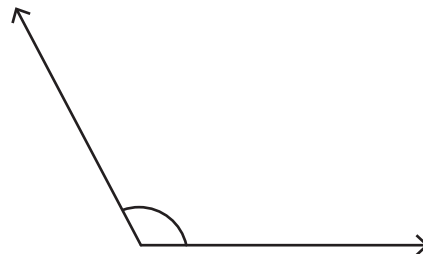
Measure each angle using a protractor.

1)



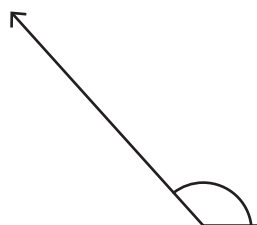
Angle: 56°

2)



Angle: 118°

3)



Angle: 67°

# PREVIEW

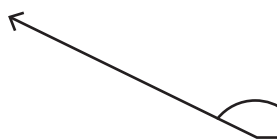
Gain complete access to the largest collection of worksheets in all subjects!

Members, please log in to download this worksheet.

Not a member? Please sign up to gain complete access.

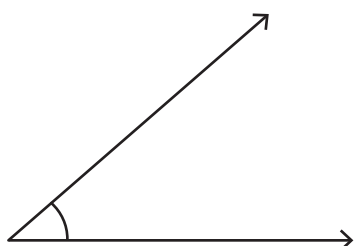
[www.mathworksheets4kids.com](http://www.mathworksheets4kids.com)

5)



Angle: 38°

7)



Angle: 41°

8)



Angle: 170°