

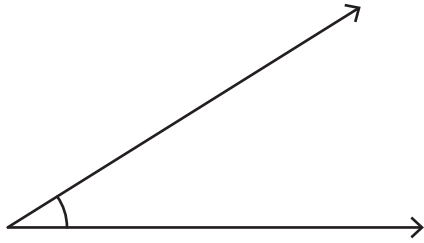
Name : _____

Measuring Angles

Inner scale: S3

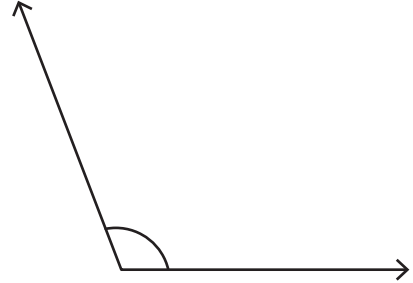
Measure each angle using a protractor.

1)



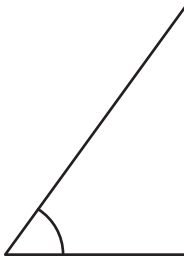
Angle: _____

2)



Angle: _____

3)

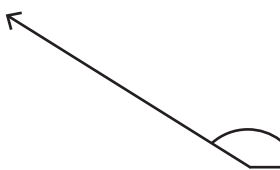


Angle: _____



Angle: _____

5)

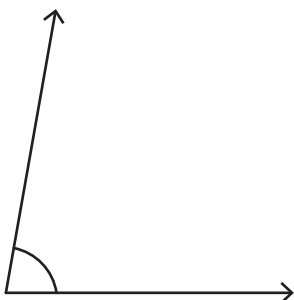


Angle: _____



Angle: _____

7)



Angle: _____

8)



Angle: _____

PREVIEW

Gain complete access to the largest collection of worksheets in all subjects!

Members, please log in to download this worksheet.

Not a member? Please sign up to gain complete access.

www.mathworksheets4kids.com

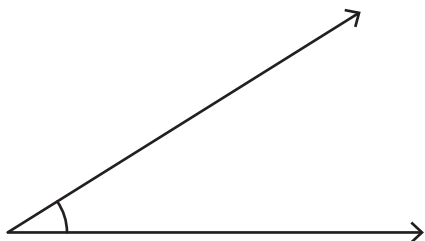
Name : _____

Measuring Angles

Inner scale: S3

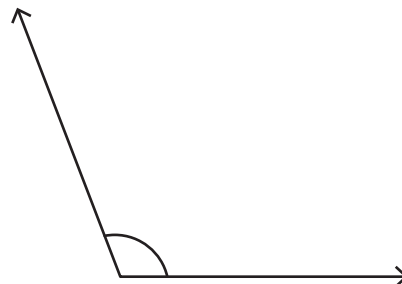
Measure each angle using a protractor.

1)



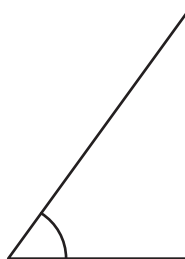
Angle: 32°

2)



Angle: 111°

3)



Angle: _____

PREVIEW

Gain complete access to the largest collection of worksheets in all subjects!

Members, please log in to download this worksheet.

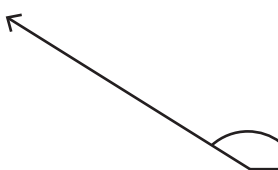
Not a member? Please sign up to gain complete access.

www.mathworksheets4kids.com




Angle: 127°

5)

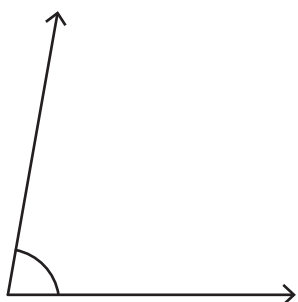


Angle: _____



Angle: 66°

7)



Angle: 80°

8)



Angle: 153°