

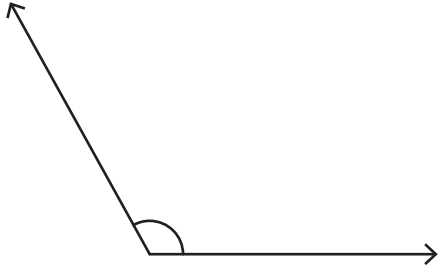
Name : _____

Measuring Angles

Inner scale: 54

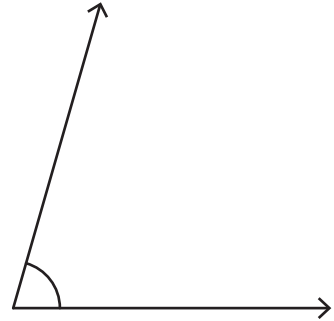
Measure each angle using a protractor.

1)



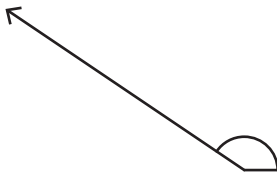
Angle: _____

2)



Angle: _____

3)



Angle: _____

PREVIEW

Gain complete access to the largest collection of worksheets in all subjects!

Members, please log in to download this worksheet.

Not a member? Please sign up to gain complete access.

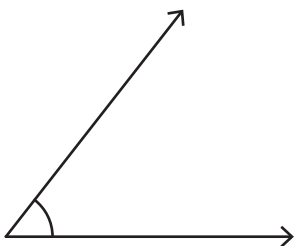
www.mathworksheets4kids.com

5)



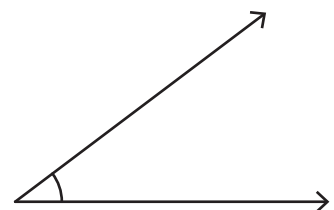
Angle: _____

7)



Angle: _____

8)



Angle: _____

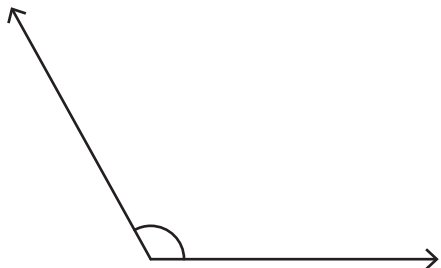
Name : _____

Measuring Angles

Inner scale: 54

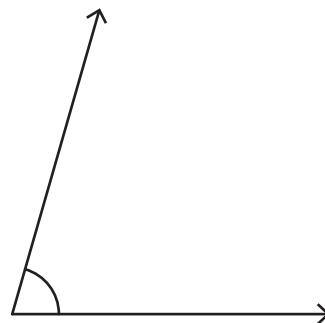
Measure each angle using a protractor.

1)



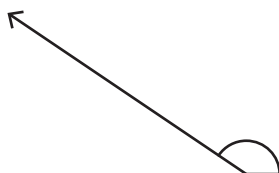
Angle: 119°

2)



Angle: 74°

3)



Angle: _____

PREVIEW

Gain complete access to the largest collection of worksheets in all subjects!

Members, please log in to download this worksheet.

Not a member? Please sign up to gain complete access.

www.mathworksheets4kids.com

Angle: 98°

5)

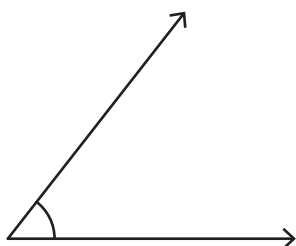


Angle: _____



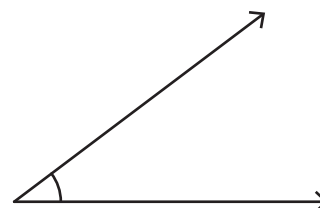
Angle: 121°

7)



Angle: 52°

8)



Angle: 37°