

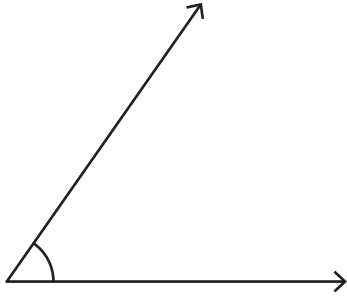
Name : _____

Measuring Angles - 5° Increments

Inner scale: 54

Measure each angle using a protractor.

1)



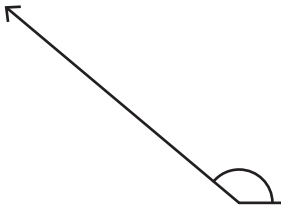
Angle: _____

2)



Angle: _____

3)



Angle: _____

PREVIEW

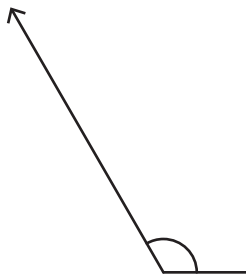
Gain complete access to the largest collection of worksheets in all subjects!

Members, please log in to download this worksheet.

Not a member? Please sign up to gain complete access.

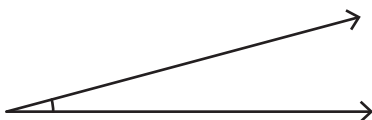
www.mathworksheets4kids.com

5)



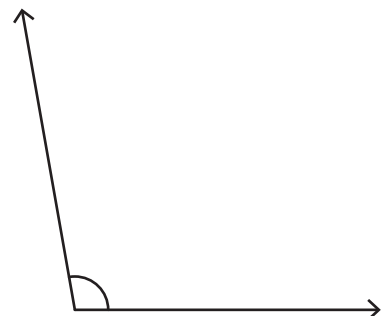
Angle: _____

7)



Angle: _____

8)



Angle: _____

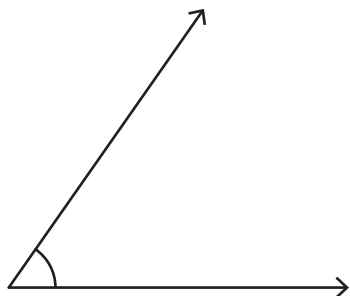
Name : _____

Measuring Angles - 5° Increments

Inner scale: 54

Measure each angle using a protractor.

1)



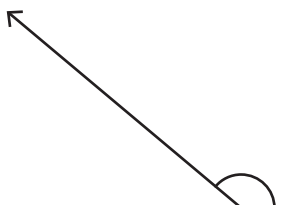
Angle: 55°

2)



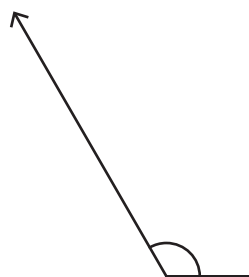
Angle: 165°

3)



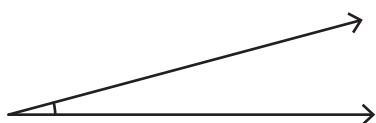
Angle: 90°

5)



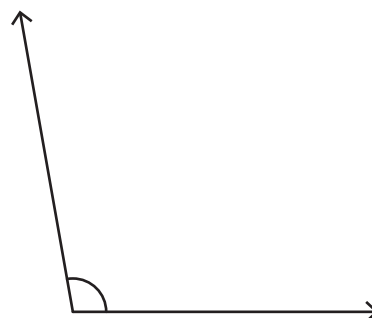
Angle: 75°

7)



Angle: 15°

8)



Angle: 100°

PREVIEW

Gain complete access to the largest collection of worksheets in all subjects!

Members, please log in to download this worksheet.

Not a member? Please sign up to gain complete access.

www.mathworksheets4kids.com