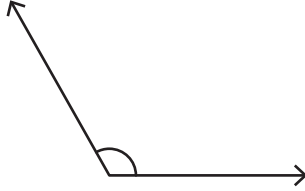


Name : _____

Measuring & Classifying Angles

Measure and classify each angle using a protractor.

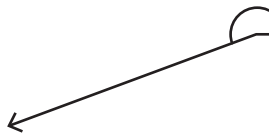
Example :



Angle: 120°

Type: Obtuse

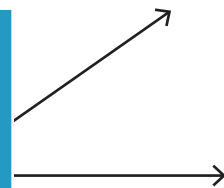
1)




Angle: _____

Type: _____

2)



3)

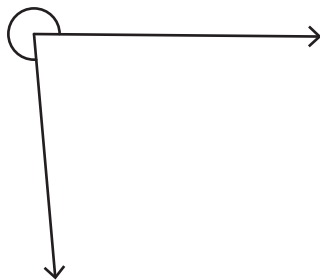


Angle: _____

Type: _____



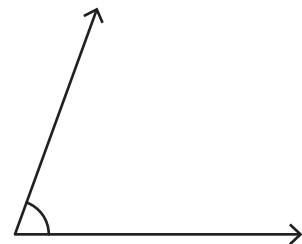
5)



Angle: _____

Type: _____

6)



Angle: _____

Type: _____

PREVIEW

Gain complete access to the largest collection of worksheets in all subjects!

Members, please log in to download this worksheet.

Not a member? Please sign up to gain complete access.

www.mathworksheets4kids.com