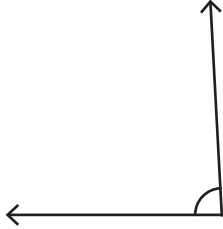


Measuring Angles - Puzzles

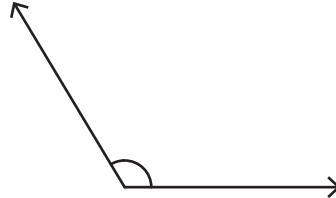
Measure each angle. Order the answers from least to greatest. Write the alphabet associated with each corresponding answer and find the mystery animal.

1)

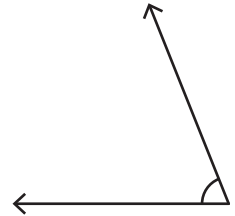
G



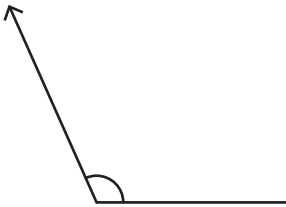
N



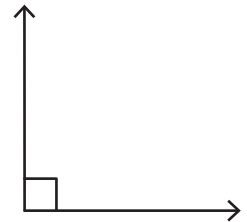
I



O



E



PREVIEW

Gain complete access to the largest collection of worksheets in all subjects!

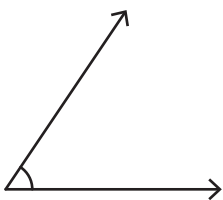
Members, please log in to download this worksheet.

Not a member? Please sign up to gain complete access.

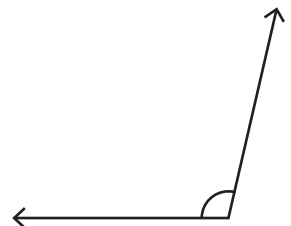
www.mathworksheets4kids.com

2)

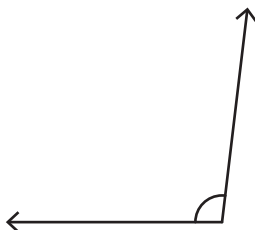
U



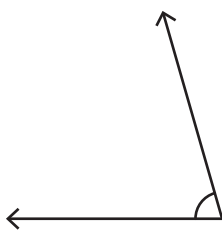
O



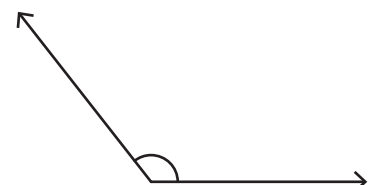
K



C



O



Mystery Animal: _____

Name : _____

Measuring Angles - Puzzles

Measure each angle. Order the answers from least to greatest. Write the alphabet associated with each corresponding answer and find the mystery animal.

1)

G

87°

N

121°

I

68°

O

114°

PREVIEW

Gain complete access to the largest collection of worksheets in all subjects!

Members, please log in to download this worksheet.

Not a member? Please sign up to gain complete access.

www.mathworksheets4kids.com

E

90°

2)

U

56°

O

103°

K

97°

C

74°

O

128°

Mystery Animal: C U C K O O