

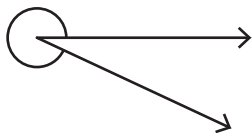
Name : \_\_\_\_\_

## Measuring Reflex Angles

Sheet 1

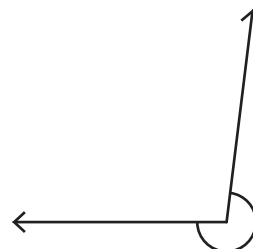
Measure each reflex angle.

1)



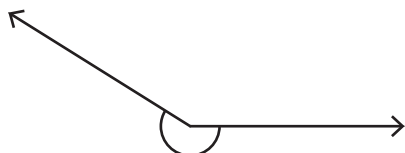
Angle: \_\_\_\_\_

2)



Angle: \_\_\_\_\_

3)



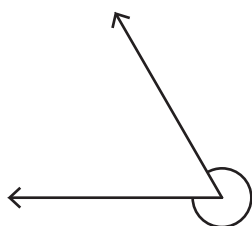
Angle: \_\_\_\_\_

4)



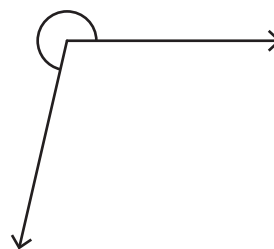
Angle: \_\_\_\_\_

5)



Angle: \_\_\_\_\_

6)



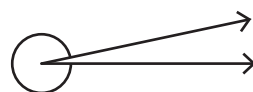
Angle: \_\_\_\_\_

7)



Angle: \_\_\_\_\_

8)



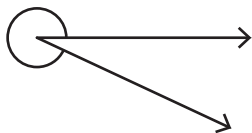
Angle: \_\_\_\_\_

Name : \_\_\_\_\_

# Measuring Reflex Angles

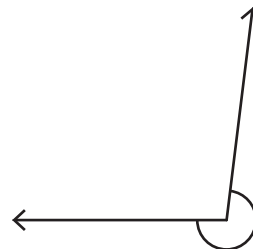
Measure each reflex angle.

1)



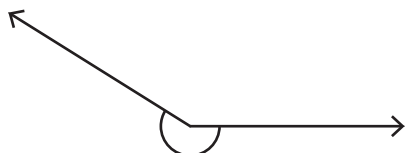
Angle: 335°

2)



Angle: 263°

3)



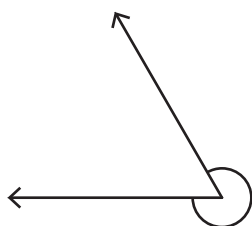
Angle: 212°

4)



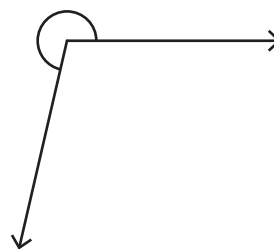
Angle: 194°

5)



Angle: 300°

6)



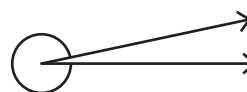
Angle: 257°

7)



Angle: 189°

8)



Angle: 348°