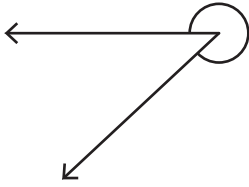


Measuring Reflex Angles

Measure each reflex angle.

1)




Angle: _____

2)




Angle: _____

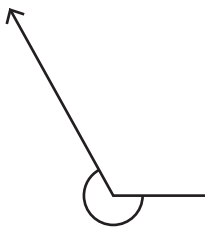
3)



Angle: _____



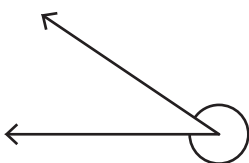
5)



Angle: _____

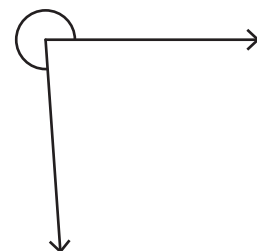


7)



Angle: _____

8)



Angle: _____

PREVIEW

Gain complete access to the largest collection of worksheets in all subjects!

Members, please log in to download this worksheet.

Not a member? Please sign up to gain complete access.

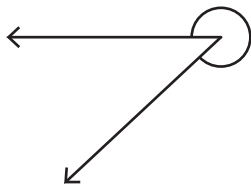
www.mathworksheets4kids.com

Name : _____

Measuring Reflex Angles

Measure each reflex angle.

1)



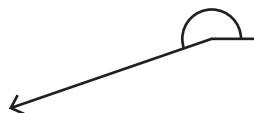
Angle: 317°

2)



Angle: 192°

3)

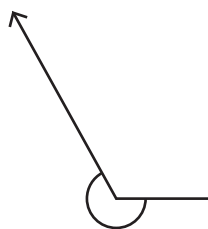


Angle: 303°



Angle: 185°

5)

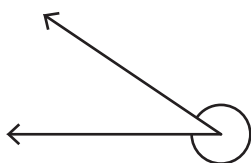


Angle: 326°



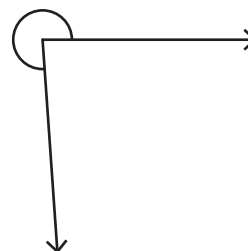
Angle: 274°

7)



Angle: 326°

8)



Angle: 274°

PREVIEW

Gain complete access to the largest collection of worksheets in all subjects!

Members, please log in to download this worksheet.

Not a member? Please sign up to gain complete access.

www.mathworksheets4kids.com