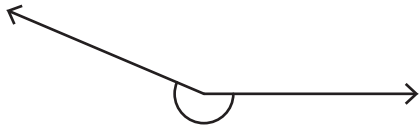


Name : _____

Measuring Reflex Angles

Measure each reflex angle.

1)



Angle: _____

2)



Angle: _____

3)



Angle: _____

5)



Angle: _____

PREVIEW

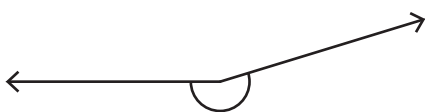
Gain complete access to the largest collection of worksheets in all subjects!

Members, please log in to download this worksheet.

Not a member? Please sign up to gain complete access.

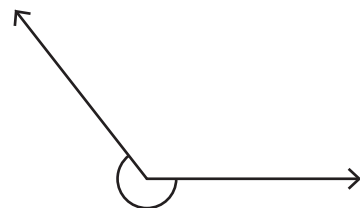
www.mathworksheets4kids.com

7)



Angle: _____

8)



Angle: _____

Name : _____

Measuring Reflex Angles

Measure each reflex angle.

1)



Angle: 203°

2)



Angle: 188°

3)



Angle: 3

229°

5)



Angle: 2

351°

PREVIEW

Gain complete access to the largest collection of worksheets in all subjects!

Members, please log in to download this worksheet.

Not a member? Please sign up to gain complete access.

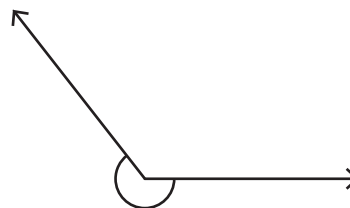
www.mathworksheets4kids.com

7)



Angle: 197°

8)



Angle: 232°