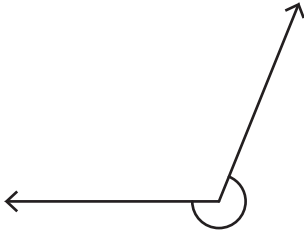


Name : _____

Measuring Reflex Angles

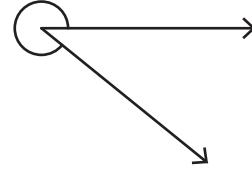
Measure each reflex angle.

1)



Angle: _____

2)

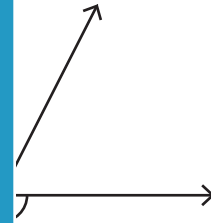


Angle: _____

3)



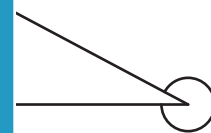
Angle: _____



5)



Angle: _____



PREVIEW

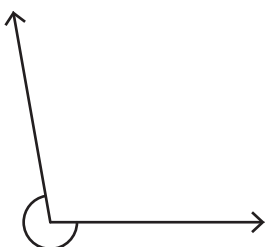
Gain complete access to the largest collection of worksheets in all subjects!

Members, please log in to download this worksheet.

Not a member? Please sign up to gain complete access.

www.mathworksheets4kids.com

7)



Angle: _____

8)



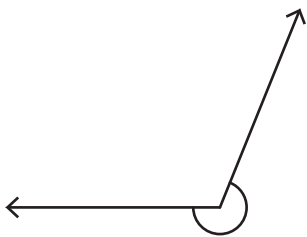
Angle: _____

Name : _____

Measuring Reflex Angles

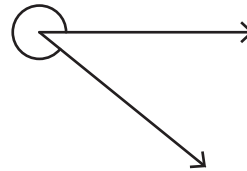
Measure each reflex angle.

1)



Angle: 248°

2)

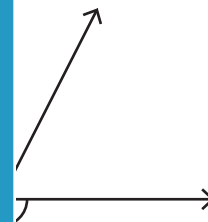


Angle: 321°

3)



Angle: 3

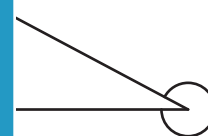


297°

5)



Angle: 1



332°

PREVIEW

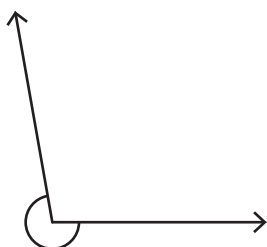
Gain complete access to the largest collection of worksheets in all subjects!

Members, please log in to download this worksheet.

Not a member? Please sign up to gain complete access.

www.mathworksheets4kids.com

7)



Angle: 260°

8)



Angle: 186°