

Name : _____

Measuring Reflex Angles

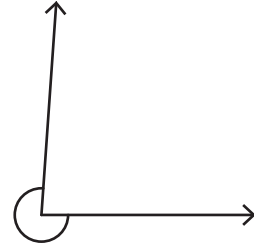
Measure each reflex angle.

1)



Angle: _____

2)

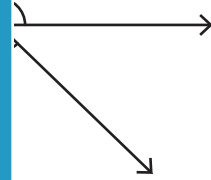


Angle: _____

3)



Angle: _____



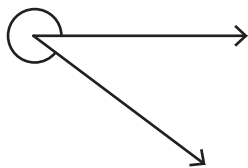
5)



Angle: _____

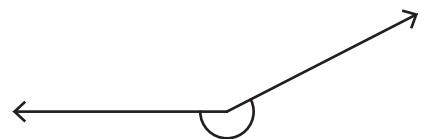


7)



Angle: _____

8)



Angle: _____

PREVIEW

Gain complete access to the largest collection of worksheets in all subjects!

Members, please log in to download this worksheet.

Not a member? Please sign up to gain complete access.

www.mathworksheets4kids.com

Name : _____

Measuring Reflex Angles

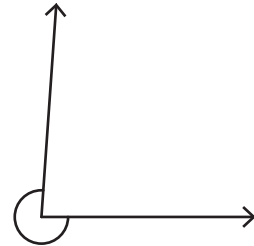
Measure each reflex angle.

1)



Angle: 181°

2)



Angle: 274°

3)



Angle: 2

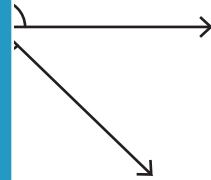
PREVIEW

Gain complete access to the largest collection of worksheets in all subjects!

Members, please log in to download this worksheet.

Not a member? Please sign up to gain complete access.

www.mathworksheets4kids.com



316°

5)

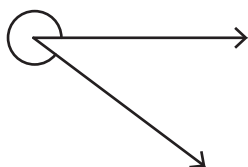


Angle: 3



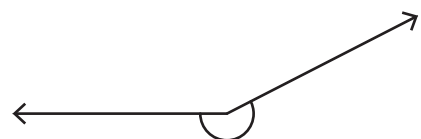
198°

7)



Angle: 323°

8)



Angle: 207°