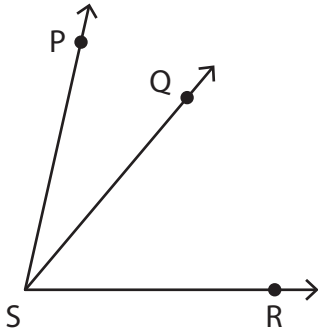


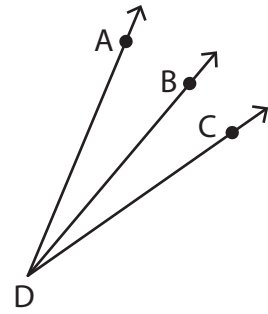
Naming Angles

Name the angles with a common vertex.

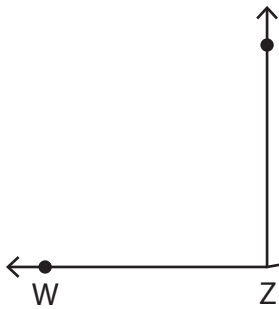
1)



2)



3)



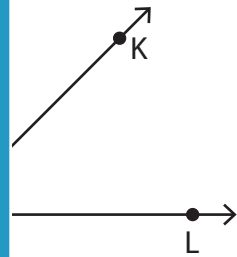
PREVIEW

Gain complete access to the largest collection of worksheets in all subjects!

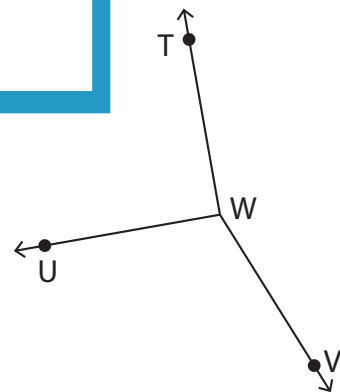
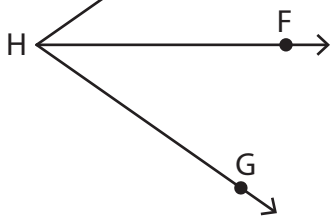
Members, please log in to download this worksheet.

Not a member? Please sign up to gain complete access.

www.mathworksheets4kids.com



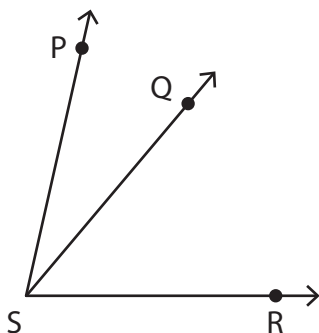
5)



Naming Angles

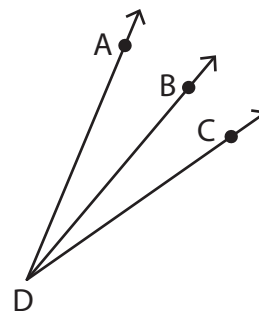
Name the angles with a common vertex.

1)



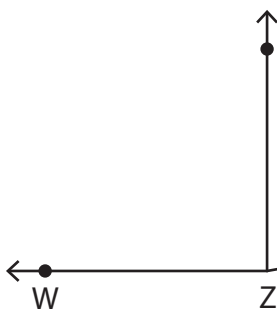
$\angle PSQ$ or $\angle QSP$, $\angle PSR$ or $\angle RSP$

2)



$\angle ADB$, $\angle BDC$ or $\angle CDB$, $\angle ADC$ or $\angle CDA$

3)



$\angle WZX$ or $\angle XZW$, $\angle WZY$ or $\angle YZW$

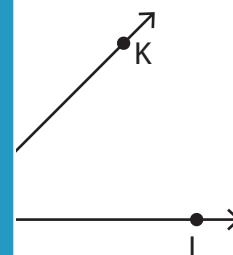
PREVIEW

Gain complete access to the largest collection of worksheets in all subjects!

Members, please log in to download this worksheet.

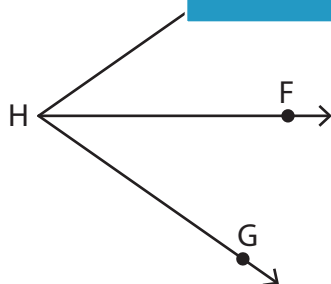
Not a member? Please sign up to gain complete access.

www.mathworksheets4kids.com

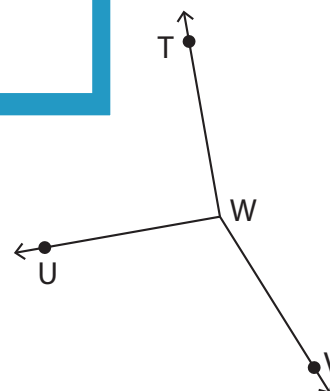


$\angle KLM$, $\angle KML$ or $\angle LMK$, $\angle JLM$ or $\angle LJM$

5)



$\angle EHF$ or $\angle FHE$, $\angle FHG$ or $\angle GHF$, $\angle EHG$ or $\angle GHE$



$\angle TWU$ or $\angle UWT$, $\angle VWU$ or $\angle UWV$, $\angle TWV$ or $\angle VWT$