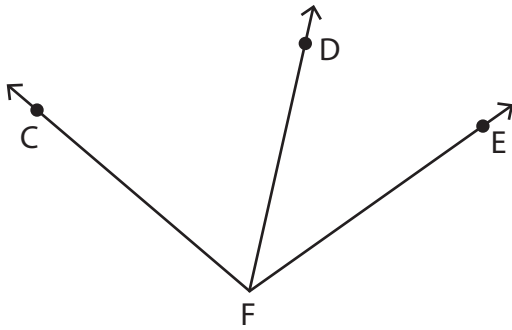


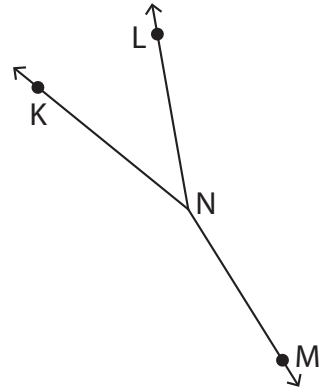
# Naming Angles

Name the angles with a common vertex.

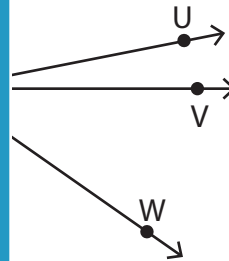
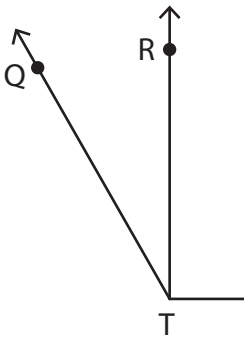
1)



2)



3)



# PREVIEW

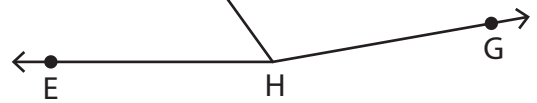
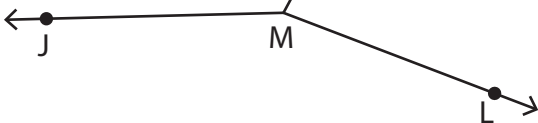
Gain complete access to the largest collection of worksheets in all subjects!

Members, please log in to download this worksheet.

Not a member? Please sign up to gain complete access.

[www.mathworksheets4kids.com](http://www.mathworksheets4kids.com)

5)



\_\_\_\_\_

\_\_\_\_\_

\_\_\_\_\_

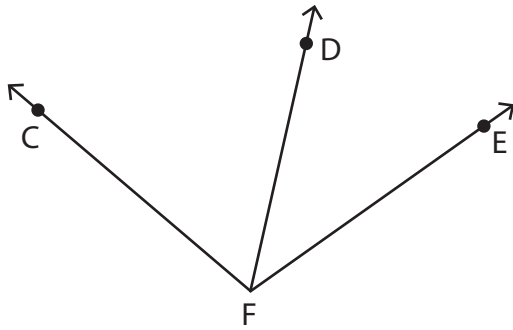
\_\_\_\_\_

Name : \_\_\_\_\_

# Naming Angles

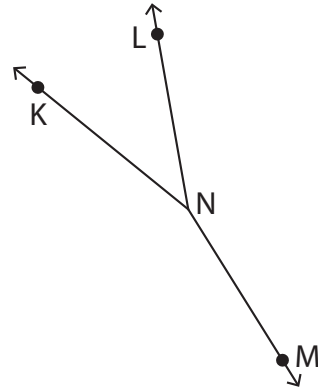
Name the angles with a common vertex.

1)



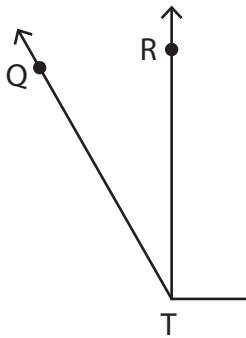
$\angle CFD$  or  $\angle DFC$ ,  $\angle CFE$  or  $\angle EFC$

2)

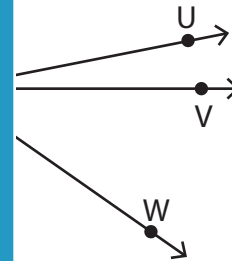


$\angle LNK$ ,  $\angle KNM$  or  $\angle MNK$ ,  $\angle LNM$

3)

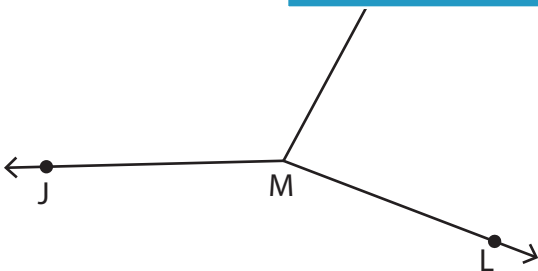


$\angle QTR$  or  $\angle RTQ$ ,  $\angle QTS$  or  $\angle STQ$

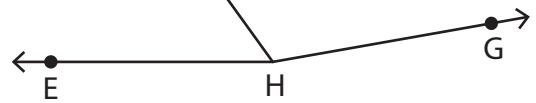


$\angle VXU$ ,  $\angle VXW$  or  $\angle WXV$ ,  $\angle WXU$

5)



$\angle JMK$  or  $\angle KMJ$ ,  $\angle KML$  or  $\angle LMK$ ,  $\angle JML$  or  $\angle LMJ$



$\angle EHF$  or  $\angle FHE$ ,  $\angle FHG$  or  $\angle GHF$ ,  $\angle EHG$  or  $\angle GHE$

## PREVIEW

Gain complete access to the largest collection of worksheets in all subjects!

Members, please log in to download this worksheet.

Not a member? Please sign up to gain complete access.

www.mathworksheets4kids.com