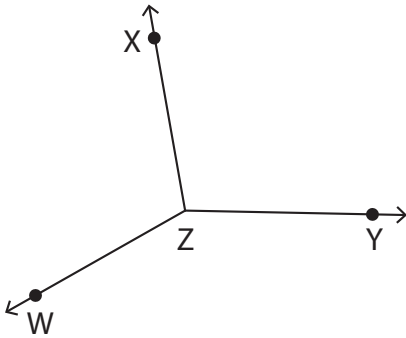


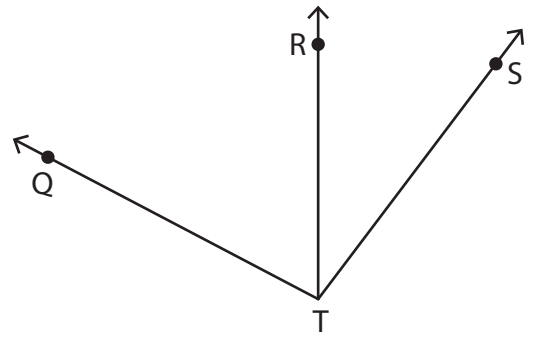
# Naming Angles

Name the angles with a common vertex.

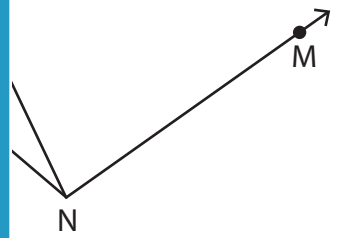
1)



2)



3)



**PREVIEW**

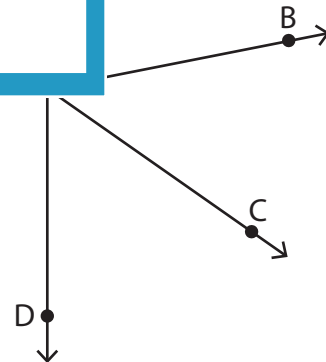
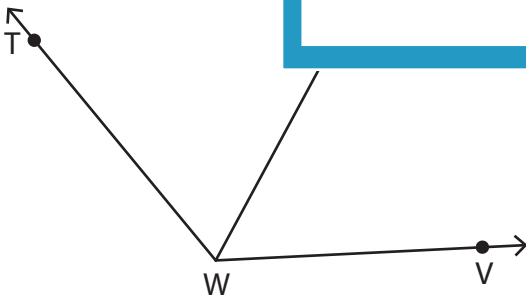
Gain complete access to the largest collection of worksheets in all subjects!

Members, please log in to download this worksheet.

Not a member? Please sign up to gain complete access.

[www.mathworksheets4kids.com](http://www.mathworksheets4kids.com)

5)



\_\_\_\_\_

\_\_\_\_\_

\_\_\_\_\_

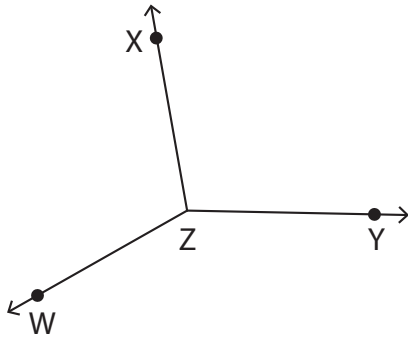
\_\_\_\_\_

Name : \_\_\_\_\_

# Naming Angles

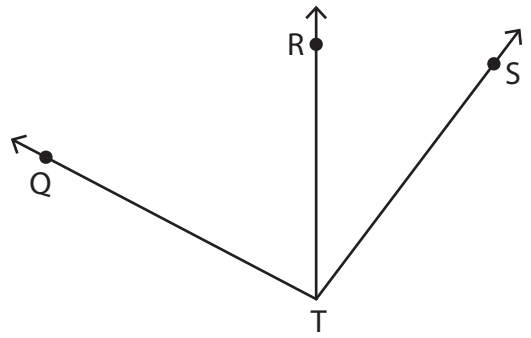
Name the angles with a common vertex.

1)



$\angle WZX$  or  $\angle XZW$ ,  $\angle WZY$  or  $\angle YZW$

2)

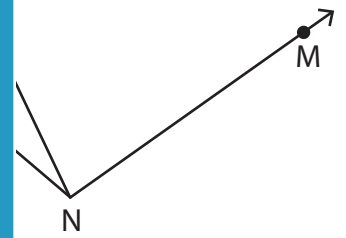


$\angle QTS$ ,  $\angle RTS$  or  $\angle STR$ ,  $\angle QTR$

3)



$\angle CFD$  or  $\angle DFC$ ,  $\angle CFE$  or  $\angle EFC$



$\angle LNM$  or  $\angle MNL$ ,  $\angle LNK$

## PREVIEW

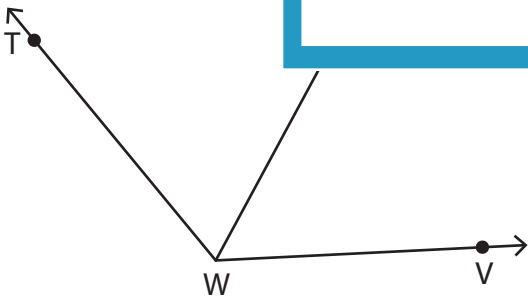
Gain complete access to the largest collection of worksheets in all subjects!

Members, please log in to download this worksheet.

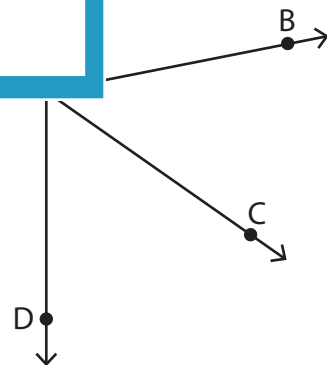
Not a member? Please sign up to gain complete access.

[www.mathworksheets4kids.com](http://www.mathworksheets4kids.com)

5)



$\angle TWU$  or  $\angle UWT$ ,  $\angle UWV$  or  $\angle VWU$ ,  $\angle TWV$  or  $\angle VWT$



$\angle BEC$  or  $\angle CEB$ ,  $\angle CED$  or  $\angle DEC$ ,  $\angle BED$  or  $\angle DEB$