

Name : _____

Drawing Angles

Sheet 1

Draw and label an angle, using the given information.

1) an obtuse angle, $\angle ABC$

2) a right angle, $\angle XYZ$

3) an acute angle, $\angle 1$

4) an obtuse angle, $\angle PQR$

5) a right angle, $\angle LMN$

6) an acute angle, $\angle U$

7) an acute angle, $\angle EFG$

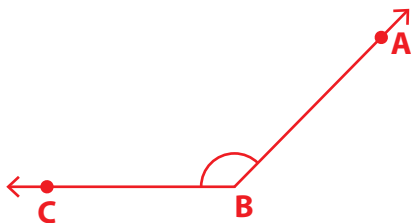
8) an obtuse angle, $\angle 6$

Name : _____

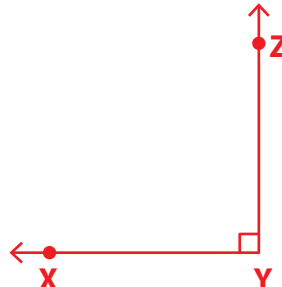
Drawing Angles

Draw and label an angle, using the given information.

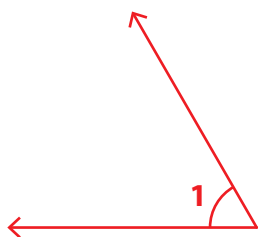
1) an obtuse angle, $\angle ABC$



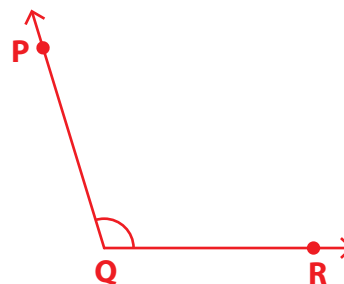
2) a right angle, $\angle XYZ$



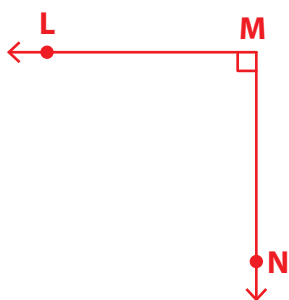
3) an acute angle, $\angle 1$



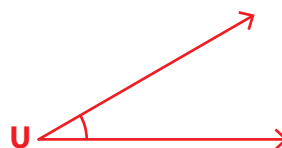
4) an obtuse angle, $\angle PQR$



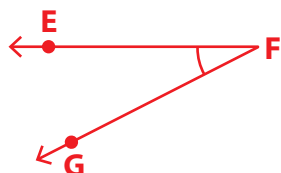
5) a right angle, $\angle LMN$



6) an acute angle, $\angle U$



7) an acute angle, $\angle EFG$



8) an obtuse angle, $\angle 6$

