

Name : \_\_\_\_\_

## Drawing Angles

Draw and label an angle, using the given information.

1) an acute angle,  $\angle DEF$

2) an obtuse angle,  $\angle 6$

3) a right angle,  $\angle RST$

4) an acute angle,  $\angle JKL$

5) an acute angle,  $\angle 5$

6) an obtuse angle,  $\angle UVW$

7) an obtuse angle,  $\angle B$

8) a right angle,  $\angle 8$

**PREVIEW**

Gain complete access to the largest collection of worksheets in all subjects!

Members, please log in to download this worksheet.

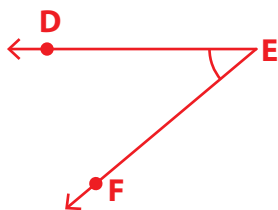
Not a member? Please sign up to gain complete access.

[www.mathworksheets4kids.com](http://www.mathworksheets4kids.com)

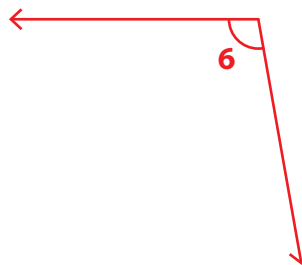
# Drawing Angles

Draw and label an angle, using the given information.

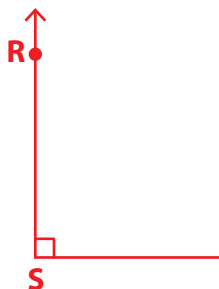
1) an acute angle,  $\angle DEF$



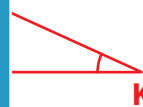
2) an obtuse angle,  $\angle 6$



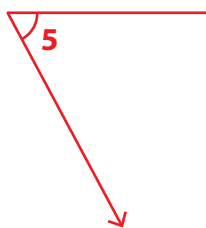
3) a right angle,  $\angle RST$



4) an acute angle,  $\angle JKL$



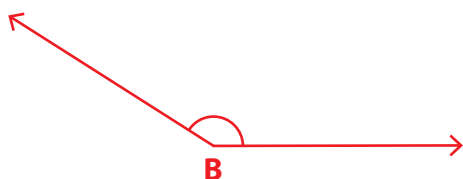
5) an acute angle,  $\angle 5$



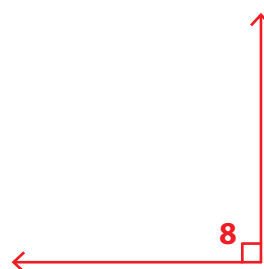
6) a right angle,  $\angle UVW$



7) an obtuse angle,  $\angle B$



8) a right angle,  $\angle 8$



**PREVIEW**

Gain complete access to the largest collection of worksheets in all subjects!

Members, please log in to download this worksheet.

Not a member? Please sign up to gain complete access.

[www.mathworksheets4kids.com](http://www.mathworksheets4kids.com)