

Name : \_\_\_\_\_

## Drawing Angles

Draw and label an angle, using the given information.

1) a right angle,  $\angle STU$

2) an acute angle,  $\angle NOP$

3) an obtuse angle,  $\angle$

$\angle 1$

5) an obtuse angle,  $\angle$

$\angle UVW$

7) an acute angle,  $\angle KLM$

8) an obtuse angle,  $\angle ABC$

**PREVIEW**

Gain complete access to the largest collection of worksheets in all subjects!

Members, please log in to download this worksheet.

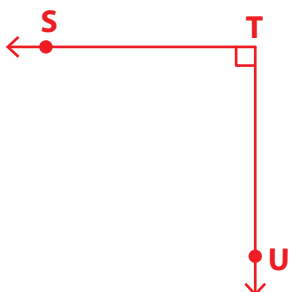
Not a member? Please sign up to gain complete access.

[www.mathworksheets4kids.com](http://www.mathworksheets4kids.com)

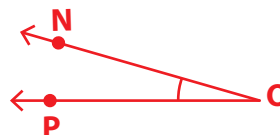
# Drawing Angles

Draw and label an angle, using the given information.

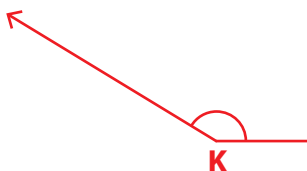
1) a right angle,  $\angle STU$



2) an acute angle,  $\angle NOP$



3) an obtuse angle,  $\angle K$



**PREVIEW**

Gain complete access to the largest collection of worksheets in all subjects!

Members, please log in to download this worksheet.

Not a member? Please sign up to gain complete access.

[www.mathworksheets4kids.com](http://www.mathworksheets4kids.com)

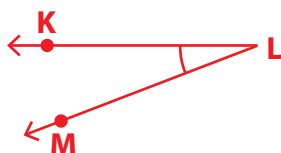
5) an obtuse angle,  $\angle 2$



6) an obtuse angle,  $\angle UVW$



7) an acute angle,  $\angle KLM$



8) an obtuse angle,  $\angle ABC$

