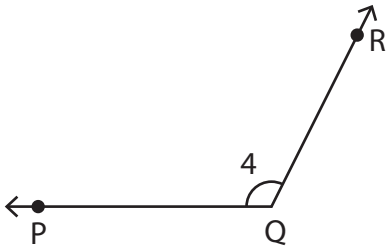


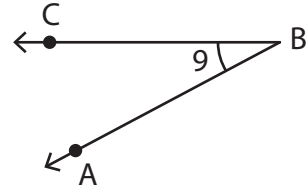
Naming Angles in Four Ways

Name each angle in four different ways.

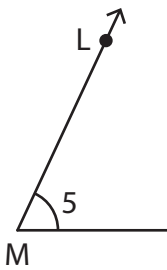
1)



2)



3)



PREVIEW


Gain complete access to the largest collection of worksheets in all subjects!

Members, please log in to download this worksheet.

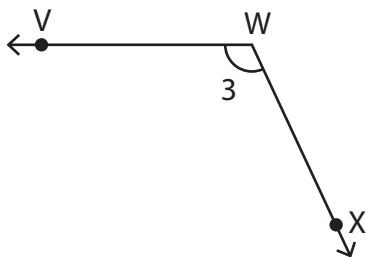
Not a member? Please sign up to gain complete access.

www.mathworksheets4kids.com

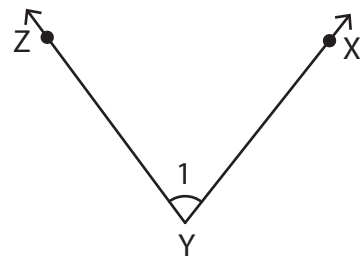
5)



7)



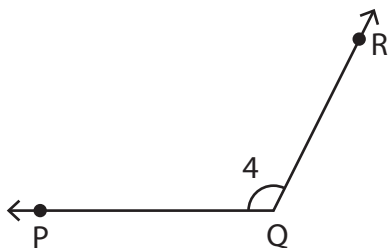
8)



Naming Angles in Four Ways

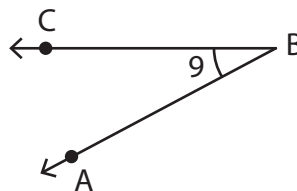
Name each angle in four different ways.

1)



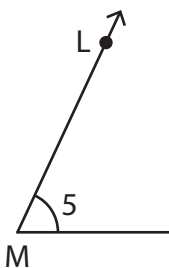
$\angle PQR, \angle RQP, \angle Q,$ and $\angle 4$

2)



$\angle ABC, \angle CBA, \angle B,$ and $\angle 9$

3)



$\angle LMN, \angle NML,$

PREVIEW

Gain complete access to the largest collection of worksheets in all subjects!

Members, please log in to download this worksheet.


Not a member? Please sign up to gain complete access.

www.mathworksheets4kids.com




$\angle FED, \angle E,$ and $\angle 2$

5)

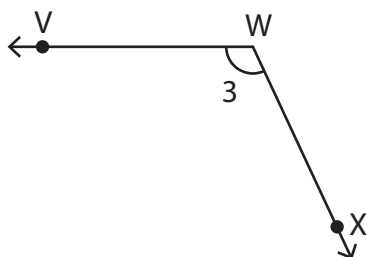


$\angle JKL, \angle LKJ,$



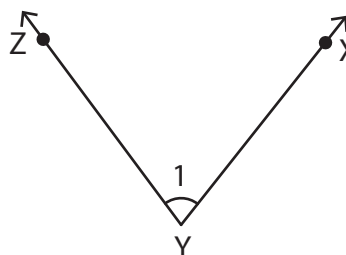
$\angle JTS, \angle T,$ and $\angle 7$

7)



$\angle VWX, \angle XWV, \angle W,$ and $\angle 3$

8)



$\angle XYZ, \angle ZYX, \angle Y,$ and $\angle 1$