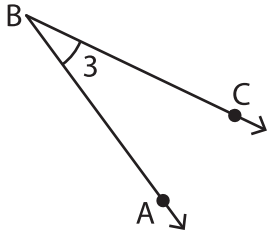


# Representation of Angles

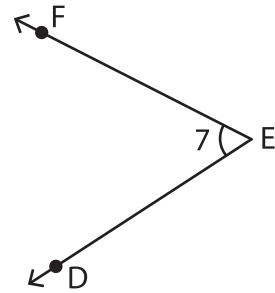
Write the missing representation of each angle.

1)



$\angle ABC \cong$  \_\_\_\_\_  $\cong \angle 3 \cong \angle CBA$

2)



\_\_\_\_\_  $\cong \angle FED \cong \angle E \cong \angle 7$

3)



$\angle PQR \cong$  \_\_\_\_\_

## PREVIEW

Gain complete access to the largest collection of worksheets in all subjects!

Members, please log in to download this worksheet.

Not a member? Please sign up to gain complete access.

[www.mathworksheets4kids.com](http://www.mathworksheets4kids.com)

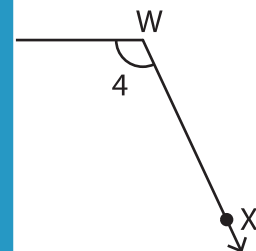


\_\_\_\_\_  $\cong \angle LKJ \cong$  \_\_\_\_\_

5)

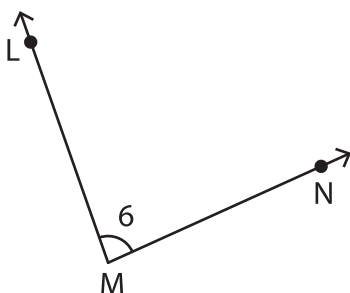


$\angle UTS \cong \angle T \cong \angle$  \_\_\_\_\_



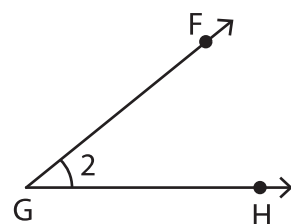
$\angle VWX \cong \angle XWV \cong \angle W$

7)



$\angle 6 \cong \angle LMN \cong$  \_\_\_\_\_  $\cong \angle M$

8)



$\angle 2 \cong \angle HGF \cong$  \_\_\_\_\_  $\cong \angle FGH$