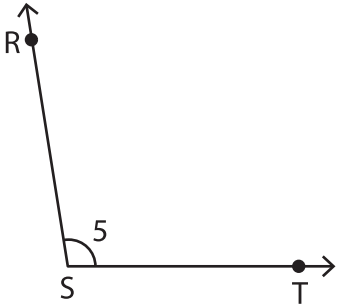


Representation of Angles

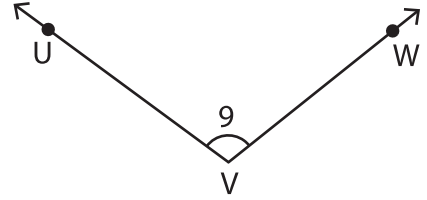
Write the missing representation of each angle.

1)



$\angle 5 \cong \angle RST \cong \underline{\hspace{2cm}} \cong \angle S$

2)

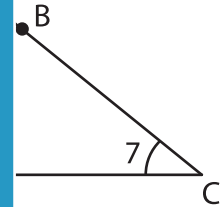


$\angle V \cong \angle WVU \cong \angle UVW \cong \underline{\hspace{2cm}}$

3)

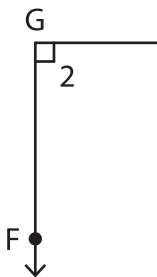


$\angle 1 \cong \angle LKJ \cong \underline{\hspace{2cm}}$

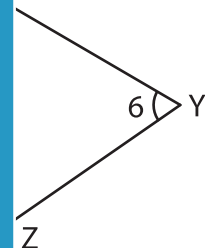


$\angle DCB \cong \angle C \cong \angle 7$

5)



$\underline{\hspace{2cm}} \cong \angle HGF$



$\underline{\hspace{2cm}} \cong \angle 6 \cong \angle Y$

PREVIEW

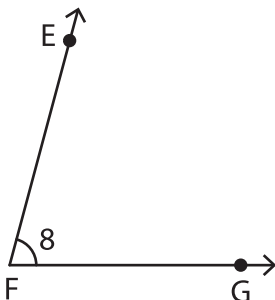
Gain complete access to the largest collection of worksheets in all subjects!

Members, please log in to download this worksheet.

Not a member? Please sign up to gain complete access.

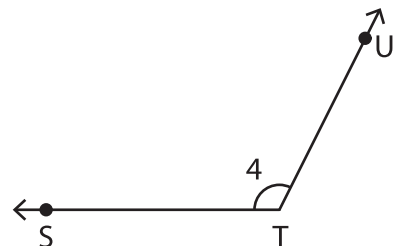
www.mathworksheets4kids.com

7)



$\angle GFE \cong \underline{\hspace{2cm}} \cong \angle 8 \cong \angle EFG$

8)



$\angle UTS \cong \angle T \cong \angle 4 \cong \underline{\hspace{2cm}}$