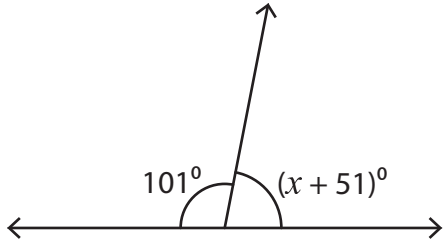


Pairs of Angles - Find x

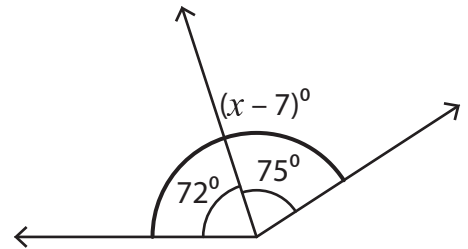
Find the value of x .

1)



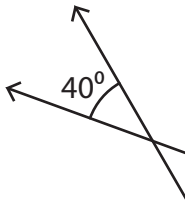
$x =$ _____

2)

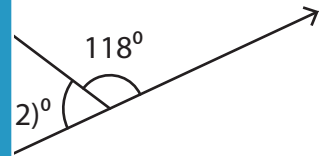


$x =$ _____

3)



$x =$ _____



$=$ _____

PREVIEW

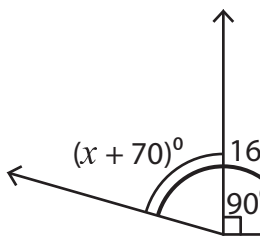
Gain complete access to the largest collection of worksheets in all subjects!

Members, please log in to download this worksheet.

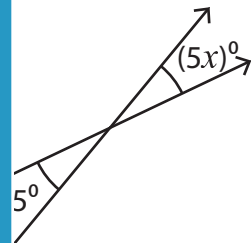
Not a member? Please sign up to gain complete access.

www.mathworksheets4kids.com

5)

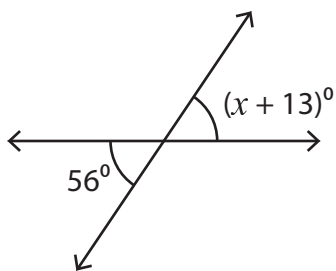


$x =$ _____



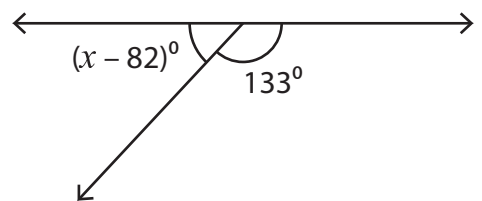
$=$ _____

7)



$x =$ _____

8)



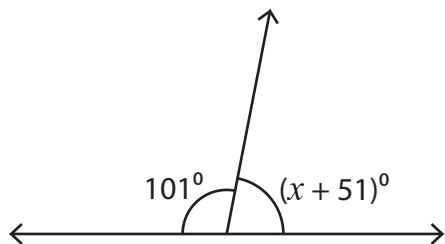
$x =$ _____

Name : _____

Pairs of Angles - Find x

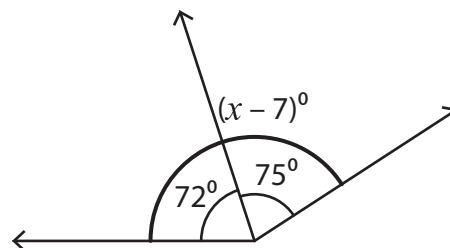
Find the value of x .

1)



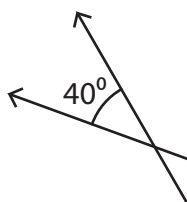
$x = \underline{\quad 28 \quad}$

2)

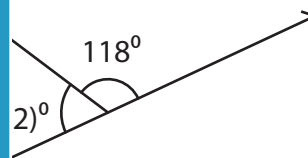


$x = \underline{\quad 154 \quad}$

3)

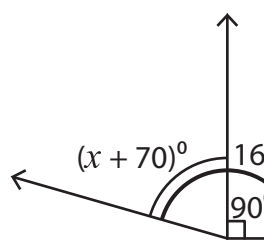


$x = \underline{\quad 1 \quad}$

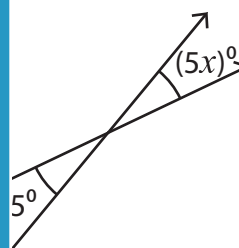


$x = \underline{\quad 134 \quad}$

5)



$x = \underline{\quad 4 \quad}$



$x = \underline{\quad 5 \quad}$

PREVIEW

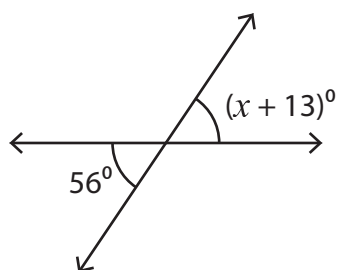
Gain complete access to the largest collection of worksheets in all subjects!

Members, please log in to download this worksheet.

Not a member? Please sign up to gain complete access.

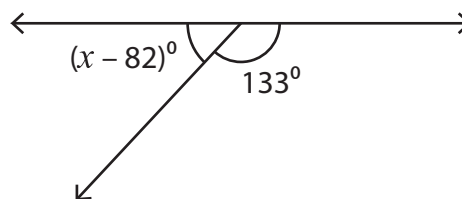
www.mathworksheets4kids.com

7)



$x = \underline{\quad 43 \quad}$

8)



$x = \underline{\quad 129 \quad}$