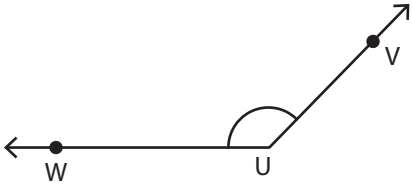


Identifying the Vertex and Arms

Identify the vertex and arms that form each angle.

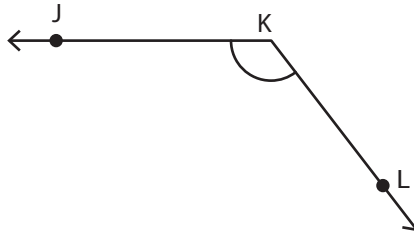
1)



Vertex: _____

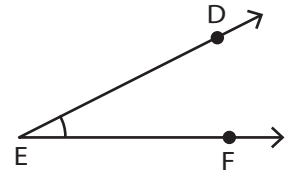
Arms: _____

2)



Vertex: _____

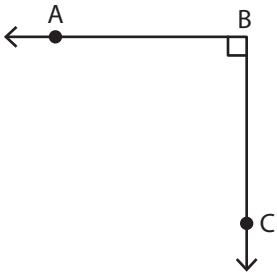
3)



Vertex: _____

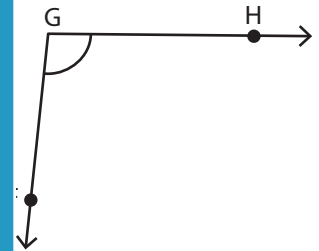
Arms: _____

4)



Vertex: _____

Arms: _____



Vertex: _____

Arms: _____

PREVIEW

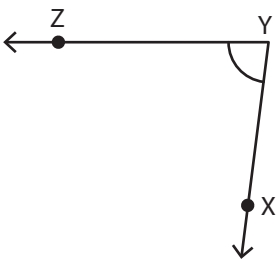
Gain complete access to the largest collection of worksheets in all subjects!

Members, please log in to download this worksheet.

Not a member? Please sign up to gain complete access.

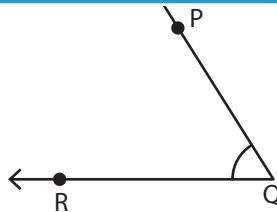
www.mathworksheets4kids.com

7)



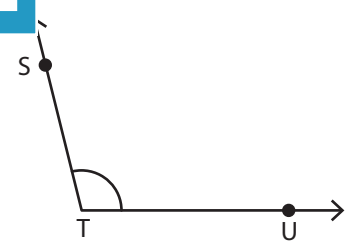
Vertex: _____

Arms: _____



Vertex: _____

Arms: _____



Vertex: _____

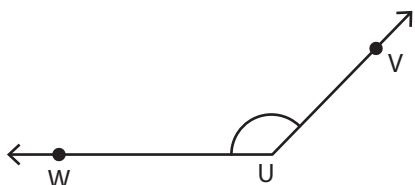
Arms: _____

Name : _____

Identifying the Vertex and Arms

Identify the vertex and arms that form each angle.

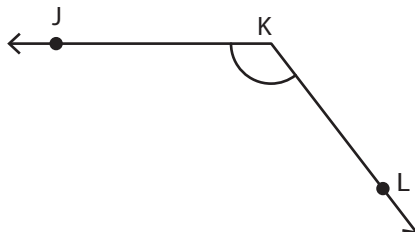
1)



Vertex: U

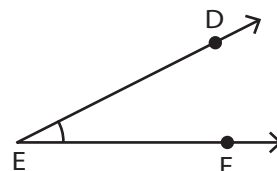
Arms: $\overrightarrow{UW}, \overrightarrow{UV}$

2)



Vertex: K

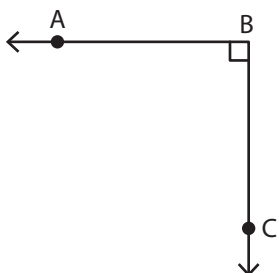
3)



Vertex: E

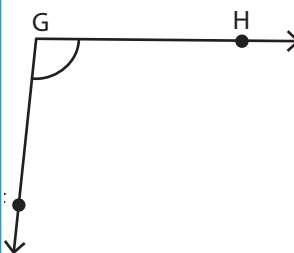
Arms: $\overrightarrow{ED}, \overrightarrow{EF}$

4)



Vertex: B

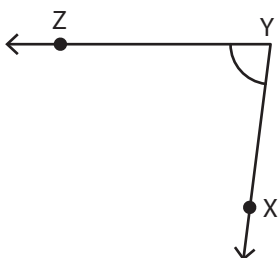
Arms: $\overrightarrow{BA}, \overrightarrow{BC}$



Vertex: G

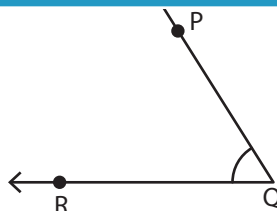
Arms: $\overrightarrow{GH}, \overrightarrow{GF}$

7)



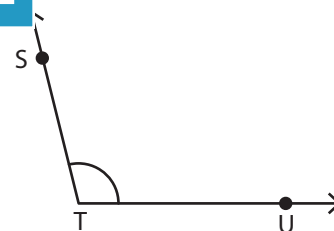
Vertex: Y

Arms: $\overrightarrow{YZ}, \overrightarrow{YX}$



Vertex: Q

Arms: $\overrightarrow{QP}, \overrightarrow{QR}$



Vertex: T

Arms: $\overrightarrow{TS}, \overrightarrow{TU}$

PREVIEW

Gain complete access to the largest collection of worksheets in all subjects!

Members, please log in to download this worksheet.

Not a member? Please sign up to gain complete access.

www.mathworksheets4kids.com